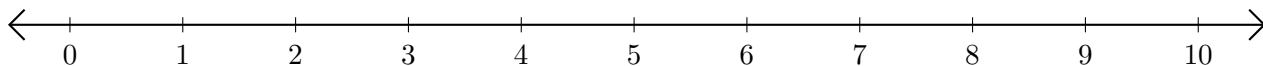


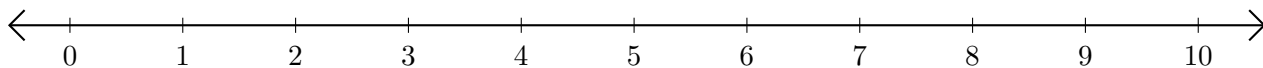
Adding and Subtracting on Number Lines (C)

Use the number lines to calculate each sum or difference.

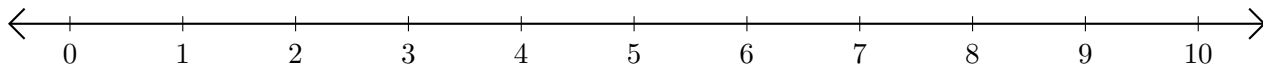
1. $9 + 1 = \underline{\quad}$



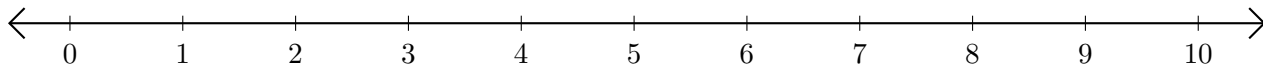
2. $9 - 7 = \underline{\quad}$



3. $2 + 5 = \underline{\quad}$



4. $9 - 8 = \underline{\quad}$



5. $6 + 4 = \underline{\quad}$

