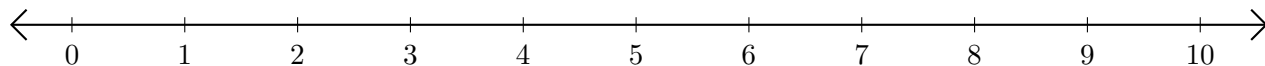


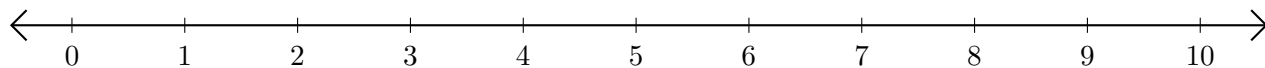
Adding and Subtracting on Number Lines (B)

Use the number lines to calculate each sum or difference.

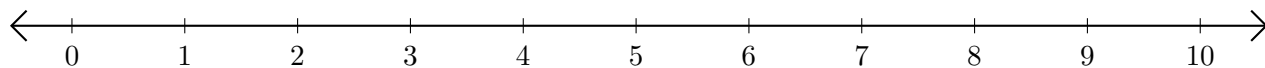
1. $4 + 6 = \underline{\quad}$



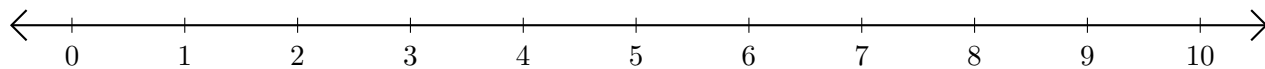
2. $10 - 7 = \underline{\quad}$



3. $3 + 1 = \underline{\quad}$



4. $7 - 5 = \underline{\quad}$



5. $2 + 5 = \underline{\quad}$

