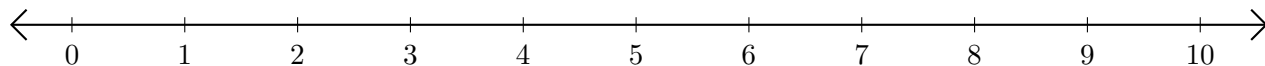


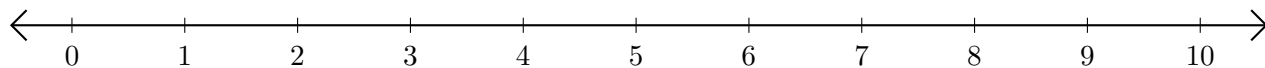
# Adding and Subtracting on Number Lines (B)

Use the number lines to calculate each sum or difference.

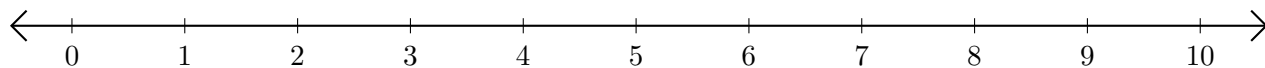
1.  $4 + 6 = \underline{\quad}$



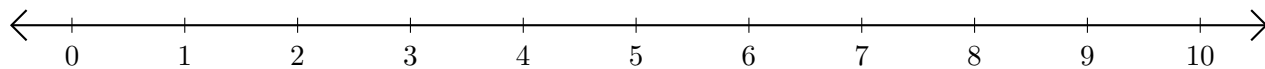
2.  $10 - 7 = \underline{\quad}$



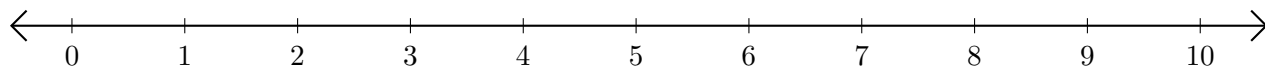
3.  $3 + 1 = \underline{\quad}$



4.  $7 - 5 = \underline{\quad}$



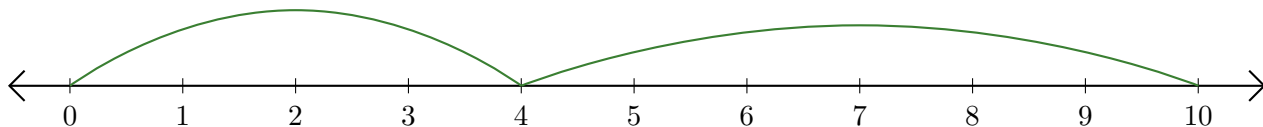
5.  $2 + 5 = \underline{\quad}$



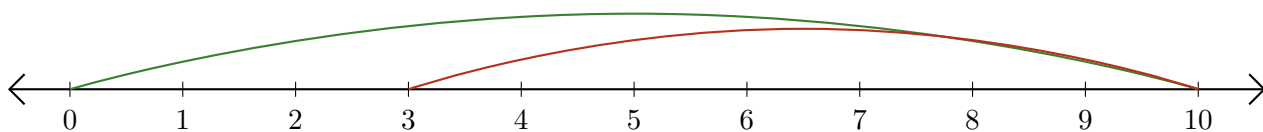
# Adding and Subtracting on Number Lines (B) Answers

Use the number lines to calculate each sum or difference.

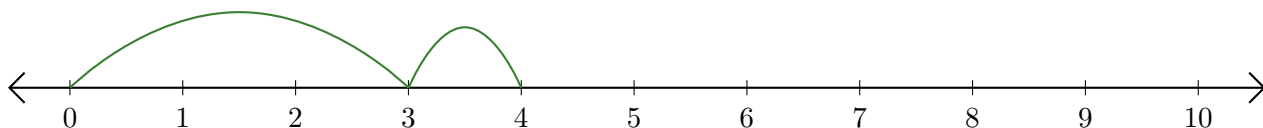
1.  $4 + 6 = \underline{10}$



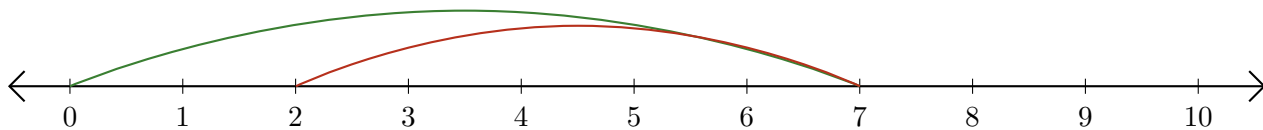
2.  $10 - 7 = \underline{3}$



3.  $3 + 1 = \underline{4}$



4.  $7 - 5 = \underline{2}$



5.  $2 + 5 = \underline{7}$

