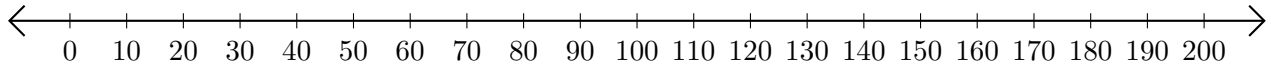


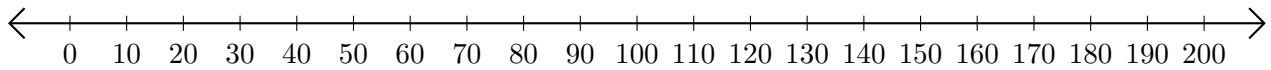
Adding on Number Lines (J)

Use the number lines to calculate each sum.

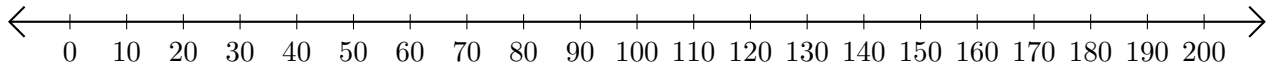
1. $190 + 10 = \underline{\hspace{2cm}}$



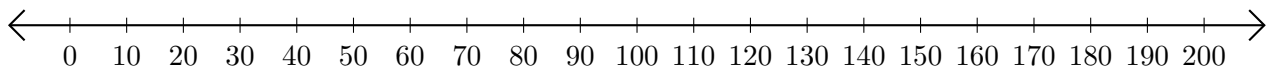
2. $90 + 10 = \underline{\hspace{2cm}}$



3. $70 + 130 = \underline{\hspace{2cm}}$



4. $130 + 10 = \underline{\hspace{2cm}}$



5. $80 + 50 = \underline{\hspace{2cm}}$

