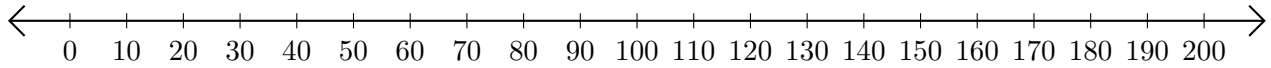


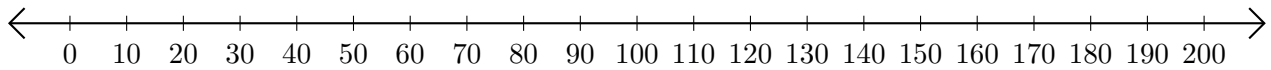
# Adding on Number Lines (J)

Use the number lines to calculate each sum.

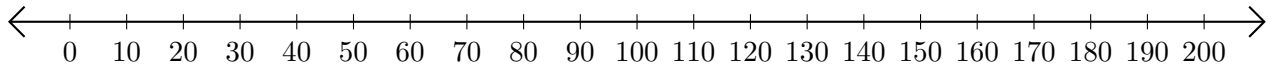
1.  $190 + 10 =$  \_\_\_\_\_



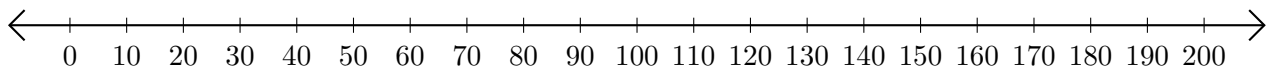
2.  $90 + 10 =$  \_\_\_\_\_



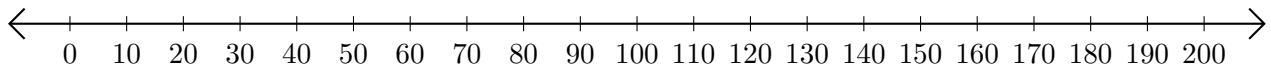
3.  $70 + 130 =$  \_\_\_\_\_



4.  $130 + 10 =$  \_\_\_\_\_



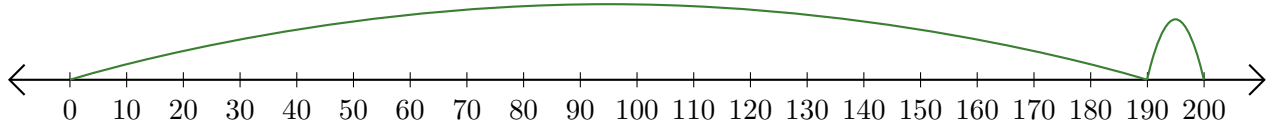
5.  $80 + 50 =$  \_\_\_\_\_



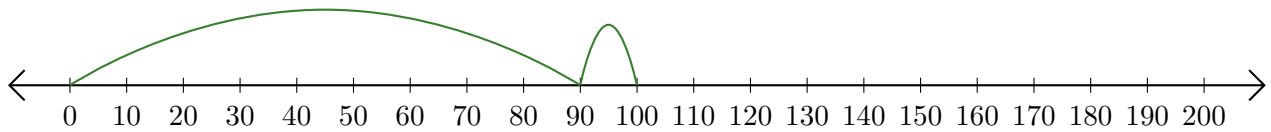
# Adding on Number Lines (J) Answers

Use the number lines to calculate each sum.

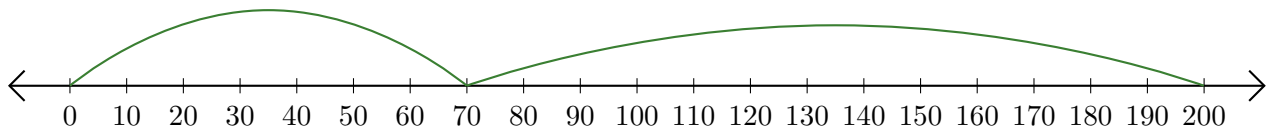
1.  $190 + 10 = \underline{200}$



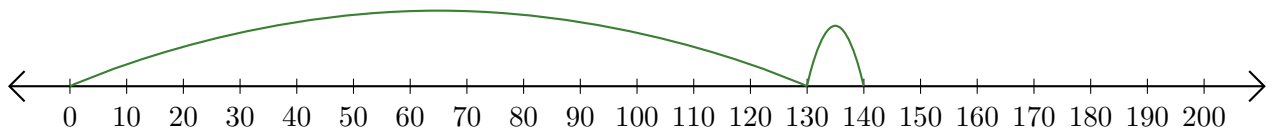
2.  $90 + 10 = \underline{100}$



3.  $70 + 130 = \underline{200}$



4.  $130 + 10 = \underline{140}$



5.  $80 + 50 = \underline{130}$

