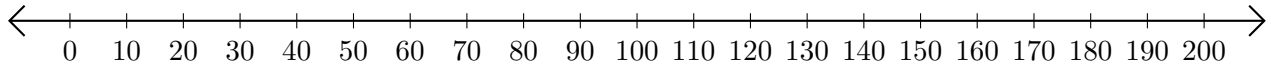


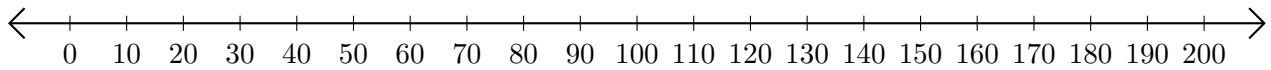
Adding on Number Lines (H)

Use the number lines to calculate each sum.

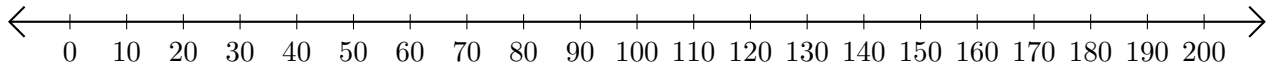
1. $140 + 30 = \underline{\hspace{2cm}}$



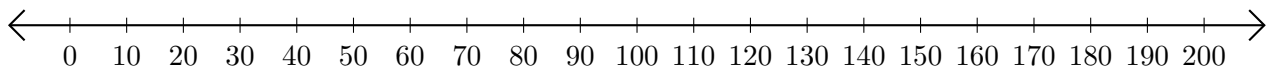
2. $150 + 50 = \underline{\hspace{2cm}}$



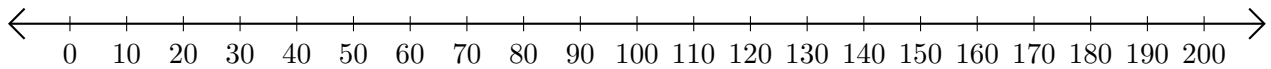
3. $90 + 70 = \underline{\hspace{2cm}}$



4. $180 + 10 = \underline{\hspace{2cm}}$



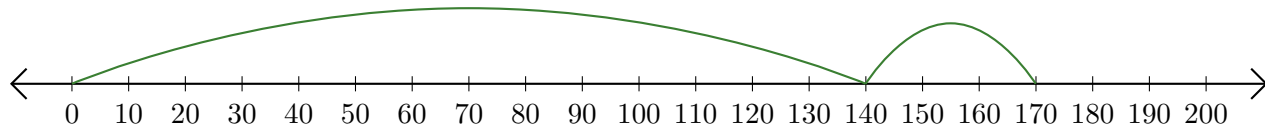
5. $100 + 90 = \underline{\hspace{2cm}}$



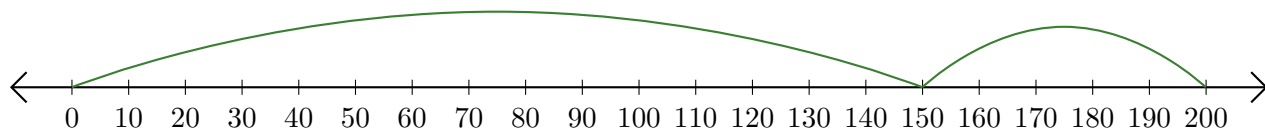
Adding on Number Lines (H) Answers

Use the number lines to calculate each sum.

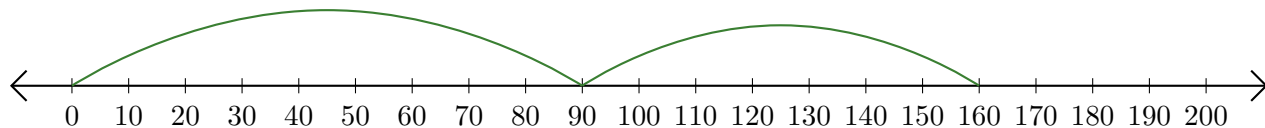
1. $140 + 30 = \underline{170}$



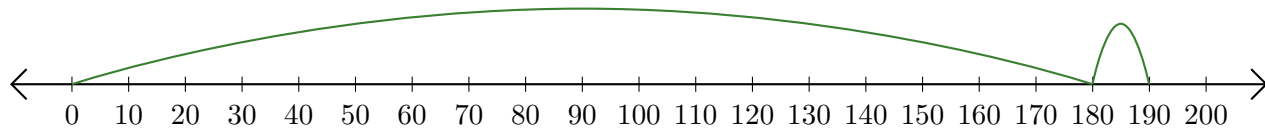
2. $150 + 50 = \underline{200}$



3. $90 + 70 = \underline{160}$



4. $180 + 10 = \underline{190}$



5. $100 + 90 = \underline{190}$

