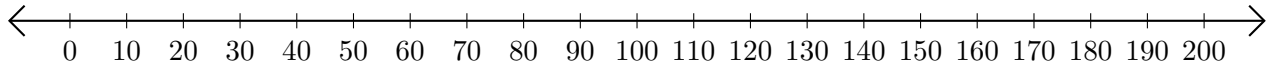


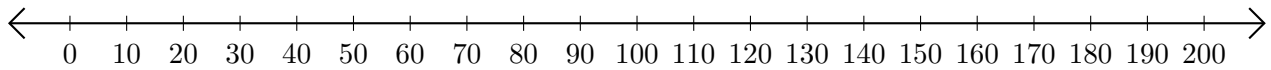
Adding on Number Lines (G)

Use the number lines to calculate each sum.

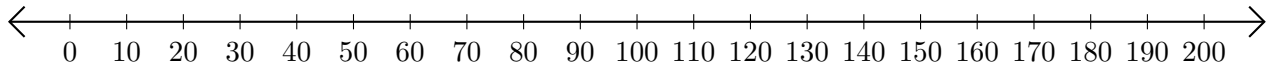
1. $150 + 40 = \underline{\hspace{2cm}}$



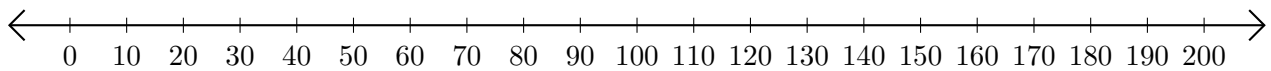
2. $30 + 100 = \underline{\hspace{2cm}}$



3. $40 + 80 = \underline{\hspace{2cm}}$



4. $120 + 40 = \underline{\hspace{2cm}}$



5. $110 + 90 = \underline{\hspace{2cm}}$

