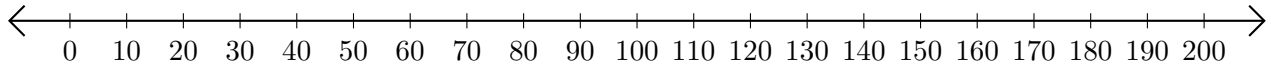


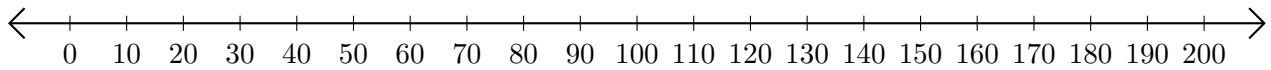
# Adding on Number Lines (G)

Use the number lines to calculate each sum.

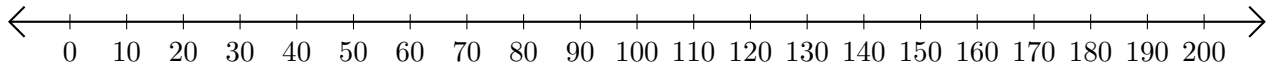
1.  $150 + 40 = \underline{\hspace{2cm}}$



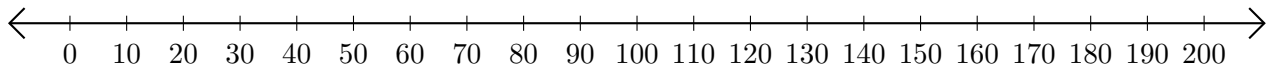
2.  $30 + 100 = \underline{\hspace{2cm}}$



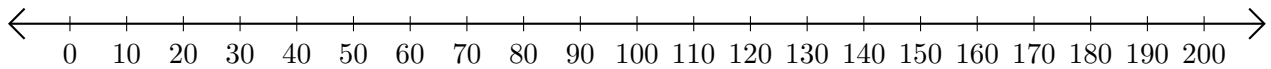
3.  $40 + 80 = \underline{\hspace{2cm}}$



4.  $120 + 40 = \underline{\hspace{2cm}}$



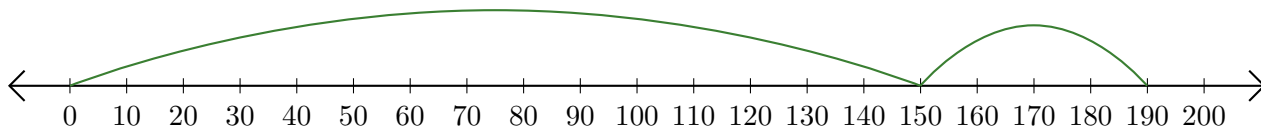
5.  $110 + 90 = \underline{\hspace{2cm}}$



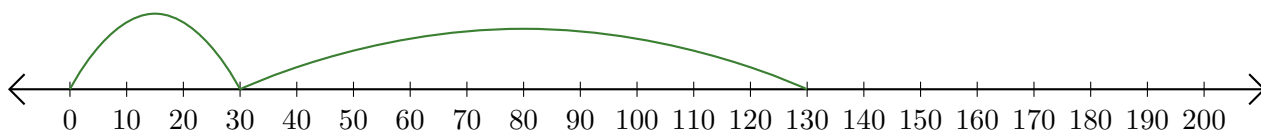
# Adding on Number Lines (G) Answers

Use the number lines to calculate each sum.

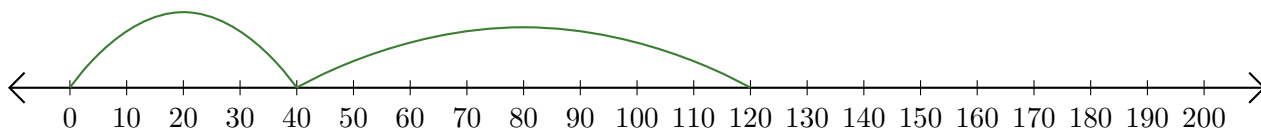
1.  $150 + 40 = \underline{190}$



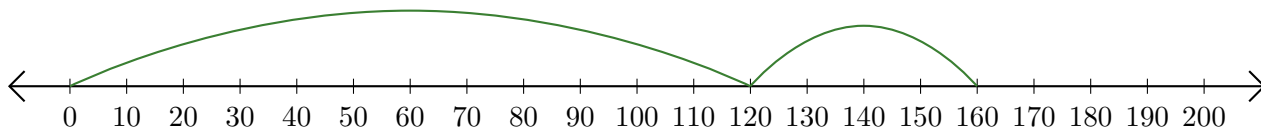
2.  $30 + 100 = \underline{130}$



3.  $40 + 80 = \underline{120}$



4.  $120 + 40 = \underline{160}$



5.  $110 + 90 = \underline{200}$

