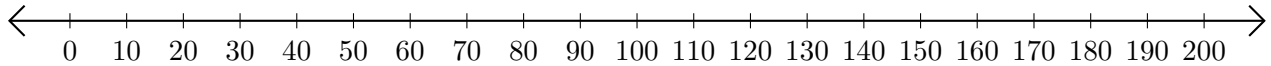


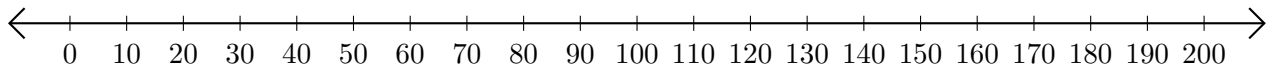
# Adding on Number Lines (F)

Use the number lines to calculate each sum.

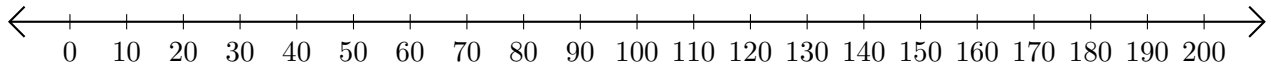
1.  $160 + 20 = \underline{\hspace{2cm}}$



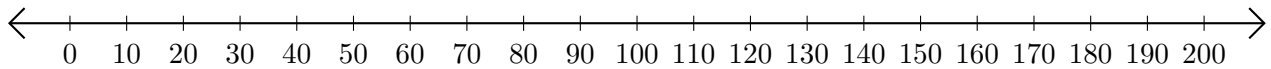
2.  $50 + 90 = \underline{\hspace{2cm}}$



3.  $150 + 40 = \underline{\hspace{2cm}}$



4.  $170 + 20 = \underline{\hspace{2cm}}$



5.  $190 + 10 = \underline{\hspace{2cm}}$

