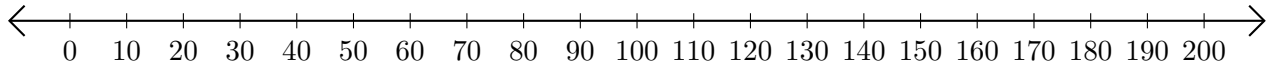


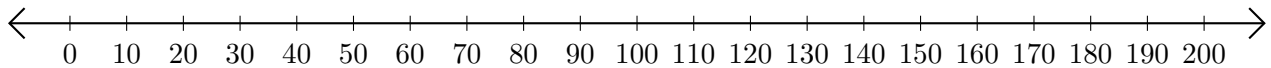
Adding on Number Lines (F)

Use the number lines to calculate each sum.

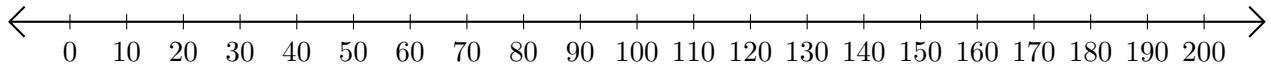
1. $160 + 20 = \underline{\hspace{2cm}}$



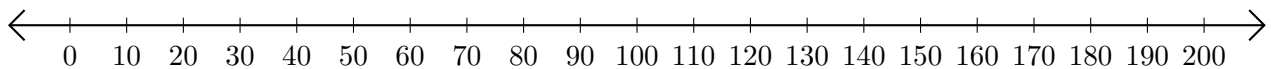
2. $50 + 90 = \underline{\hspace{2cm}}$



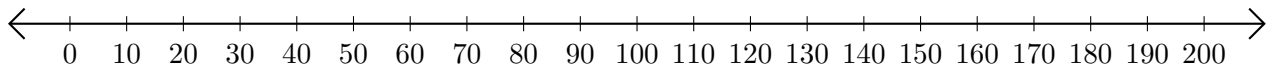
3. $150 + 40 = \underline{\hspace{2cm}}$



4. $170 + 20 = \underline{\hspace{2cm}}$



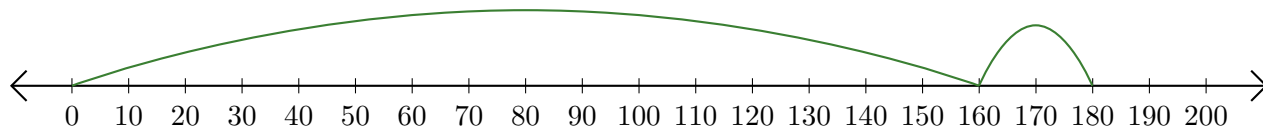
5. $190 + 10 = \underline{\hspace{2cm}}$



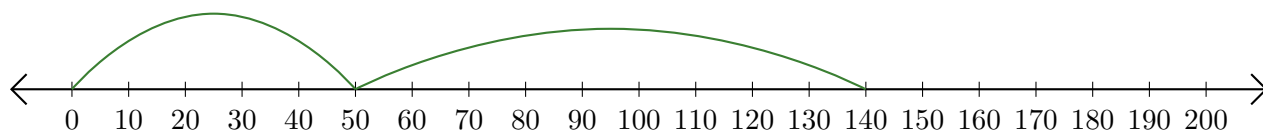
Adding on Number Lines (F) Answers

Use the number lines to calculate each sum.

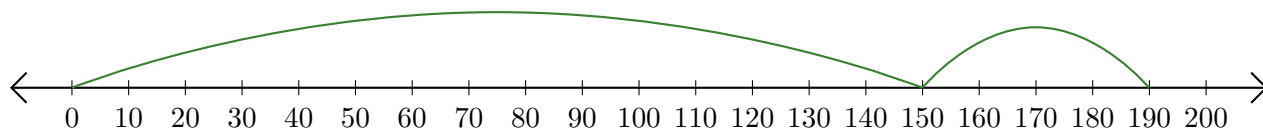
1. $160 + 20 = \underline{180}$



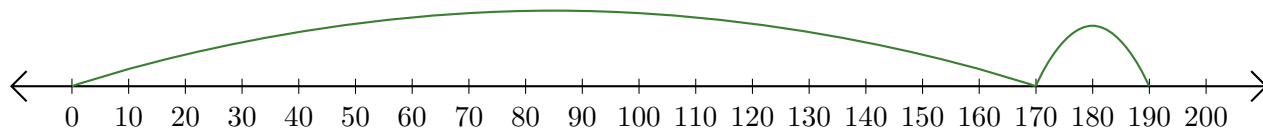
2. $50 + 90 = \underline{140}$



3. $150 + 40 = \underline{190}$



4. $170 + 20 = \underline{190}$



5. $190 + 10 = \underline{200}$

