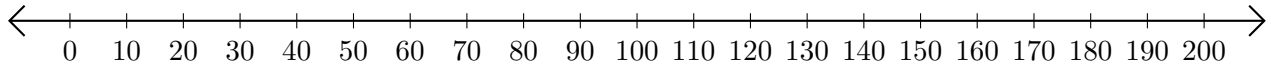


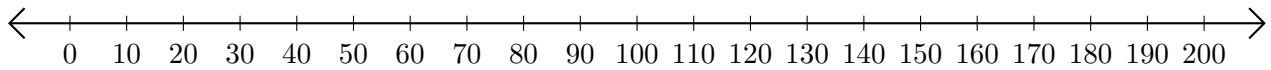
# Adding on Number Lines (D)

Use the number lines to calculate each sum.

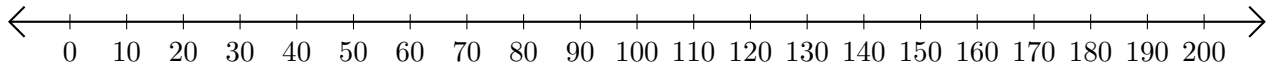
1.  $130 + 60 = \underline{\hspace{2cm}}$



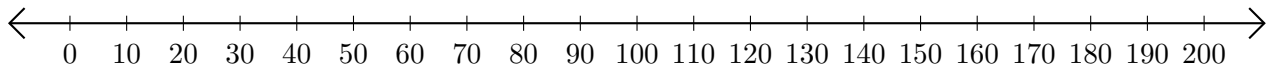
2.  $40 + 30 = \underline{\hspace{2cm}}$



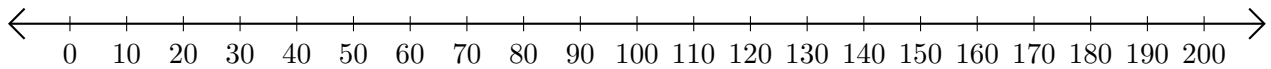
3.  $110 + 50 = \underline{\hspace{2cm}}$



4.  $10 + 180 = \underline{\hspace{2cm}}$



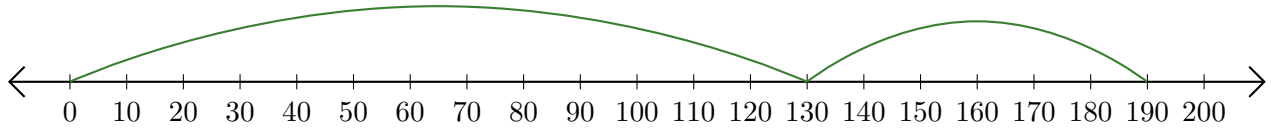
5.  $20 + 30 = \underline{\hspace{2cm}}$




# Adding on Number Lines (D) Answers

Use the number lines to calculate each sum.

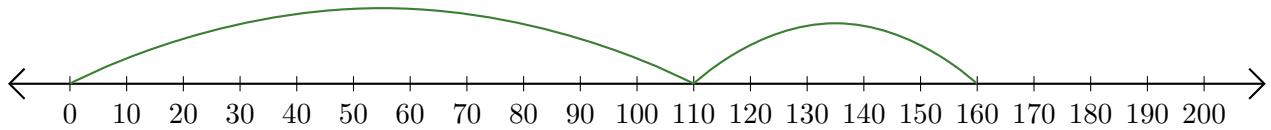
1.  $130 + 60 = \underline{190}$



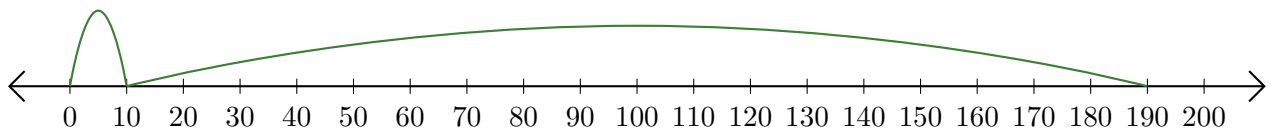
2.  $40 + 30 = \underline{70}$



3.  $110 + 50 = \underline{160}$



4.  $10 + 180 = \underline{190}$



5.  $20 + 30 = \underline{50}$

