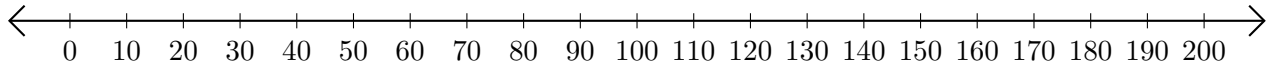


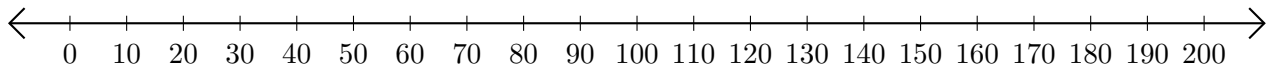
Adding on Number Lines (C)

Use the number lines to calculate each sum.

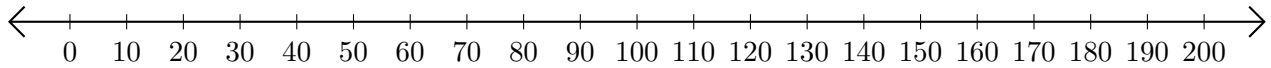
1. $130 + 70 = \underline{\hspace{2cm}}$



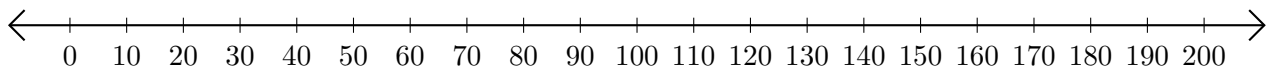
2. $110 + 80 = \underline{\hspace{2cm}}$



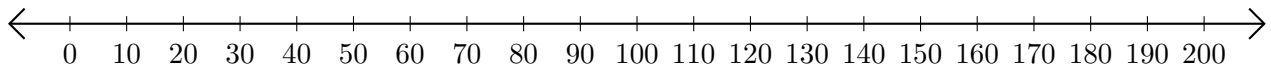
3. $140 + 40 = \underline{\hspace{2cm}}$



4. $100 + 60 = \underline{\hspace{2cm}}$



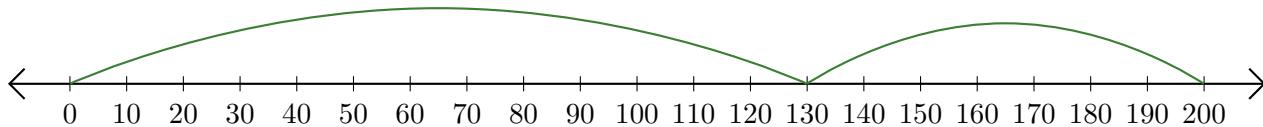
5. $180 + 20 = \underline{\hspace{2cm}}$



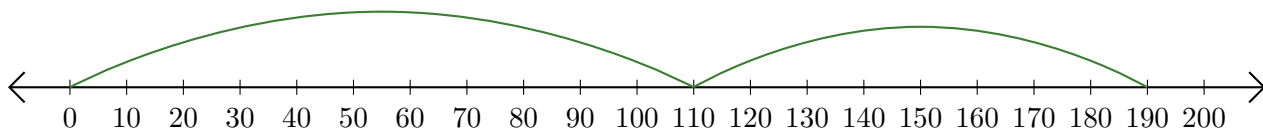
Adding on Number Lines (C) Answers

Use the number lines to calculate each sum.

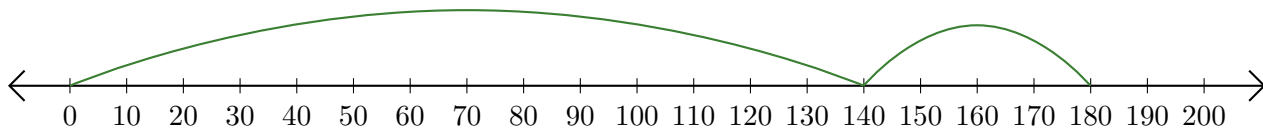
1. $130 + 70 = \underline{200}$



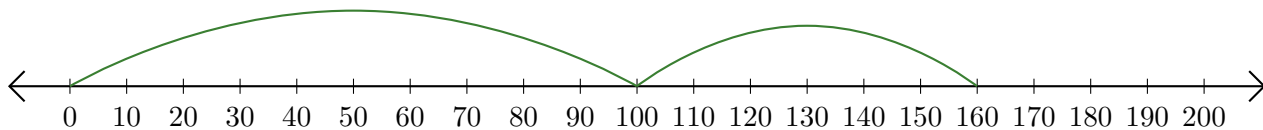
2. $110 + 80 = \underline{190}$



3. $140 + 40 = \underline{180}$



4. $100 + 60 = \underline{160}$



5. $180 + 20 = \underline{200}$

