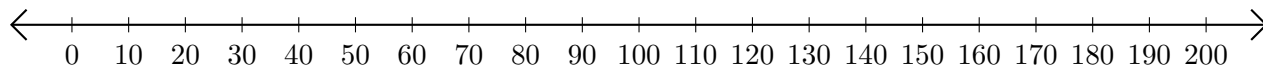


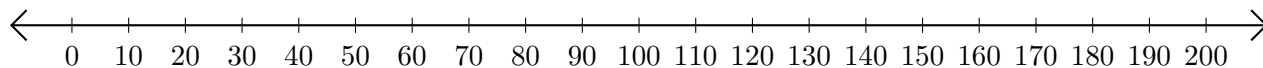
Adding on Number Lines (B)

Use the number lines to calculate each sum.

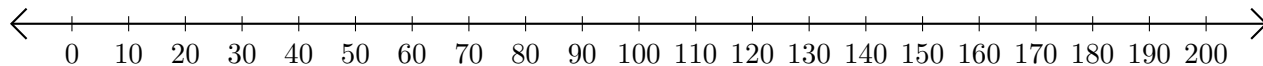
1. $180 + 20 = \underline{\hspace{2cm}}$



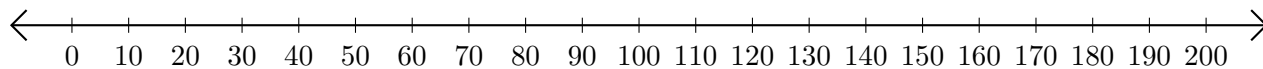
2. $10 + 50 = \underline{\hspace{2cm}}$



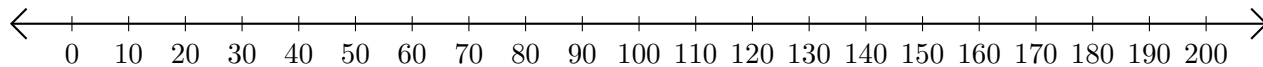
3. $170 + 10 = \underline{\hspace{2cm}}$



4. $20 + 160 = \underline{\hspace{2cm}}$



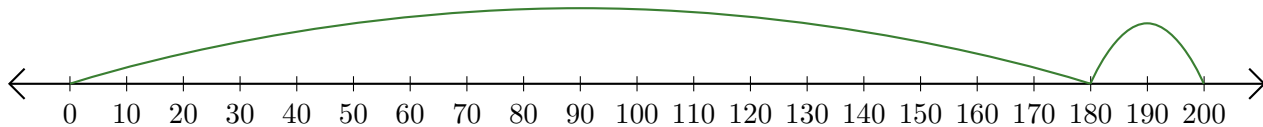
5. $120 + 70 = \underline{\hspace{2cm}}$



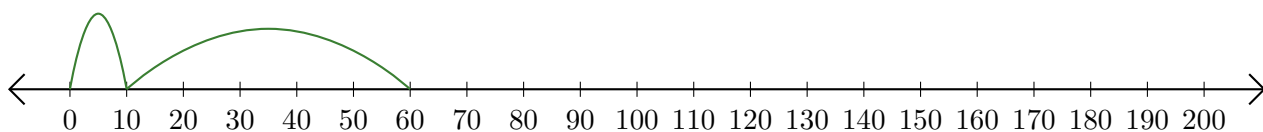
Adding on Number Lines (B) Answers

Use the number lines to calculate each sum.

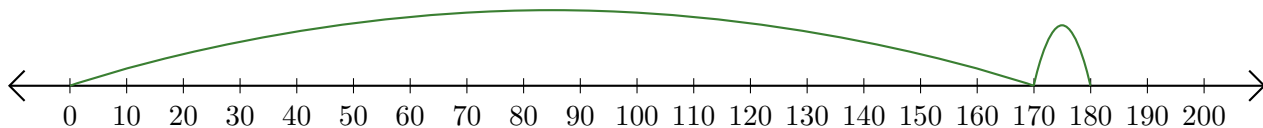
1. $180 + 20 = \underline{200}$



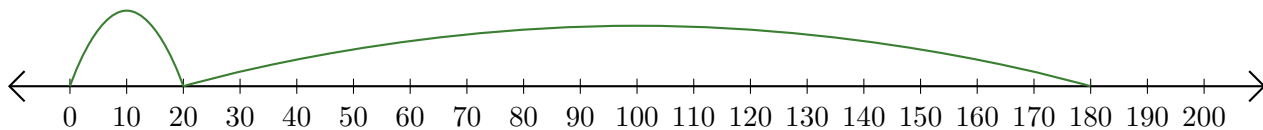
2. $10 + 50 = \underline{60}$



3. $170 + 10 = \underline{180}$



4. $20 + 160 = \underline{180}$



5. $120 + 70 = \underline{190}$

