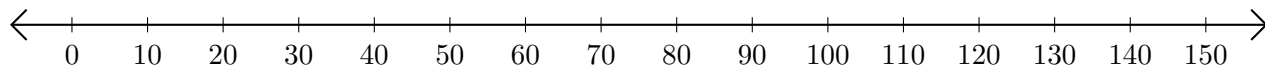


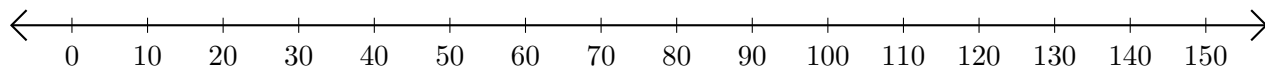
Adding on Number Lines (I)

Use the number lines to calculate each sum.

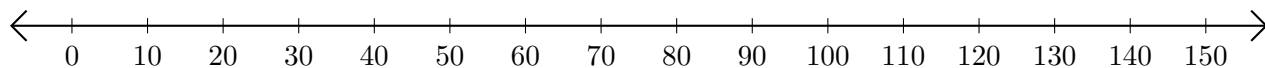
1. $110 + 30 = \underline{\quad}$



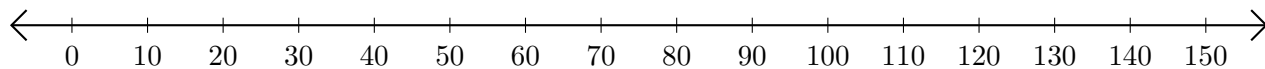
2. $10 + 80 = \underline{\quad}$



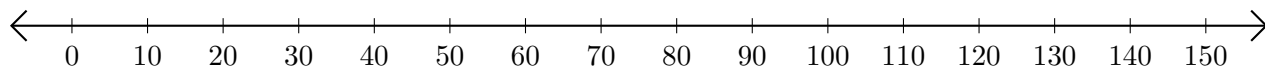
3. $20 + 120 = \underline{\quad}$



4. $90 + 20 = \underline{\quad}$



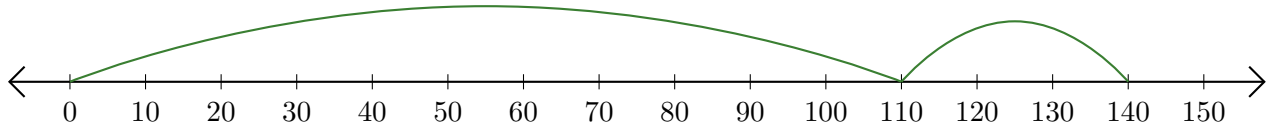
5. $130 + 20 = \underline{\quad}$



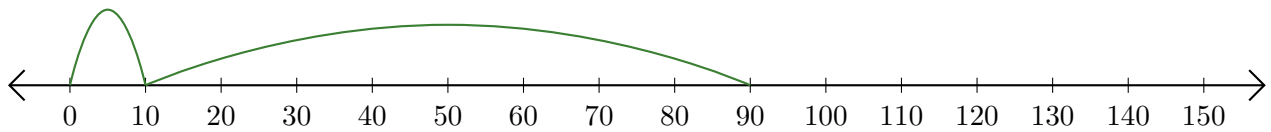
Adding on Number Lines (I) Answers

Use the number lines to calculate each sum.

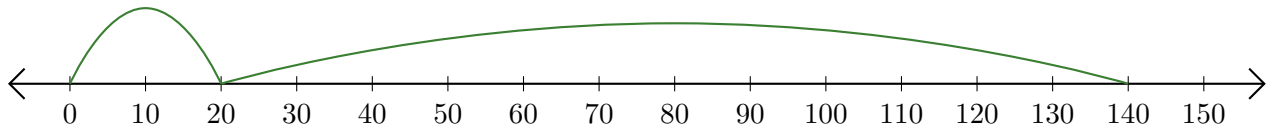
1. $110 + 30 = \underline{140}$



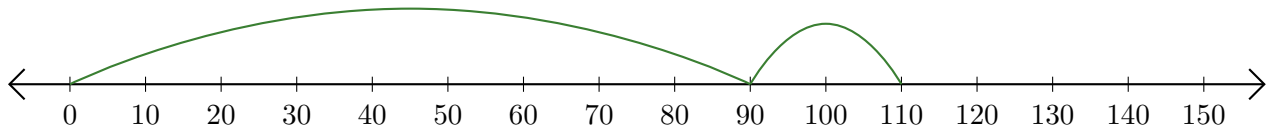
2. $10 + 80 = \underline{90}$



3. $20 + 120 = \underline{140}$



4. $90 + 20 = \underline{110}$



5. $130 + 20 = \underline{150}$

