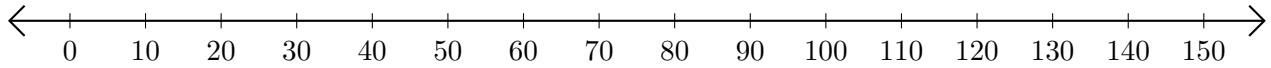


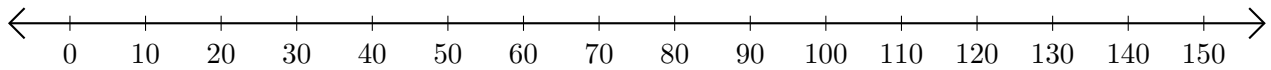
# Adding on Number Lines (F)

Use the number lines to calculate each sum.

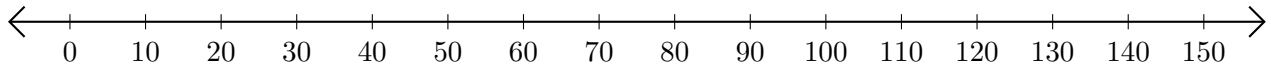
1.  $80 + 20 = \underline{\hspace{2cm}}$



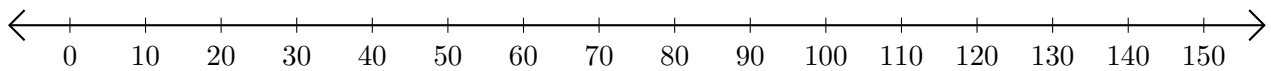
2.  $50 + 90 = \underline{\hspace{2cm}}$



3.  $40 + 60 = \underline{\hspace{2cm}}$



4.  $120 + 20 = \underline{\hspace{2cm}}$



5.  $100 + 30 = \underline{\hspace{2cm}}$

