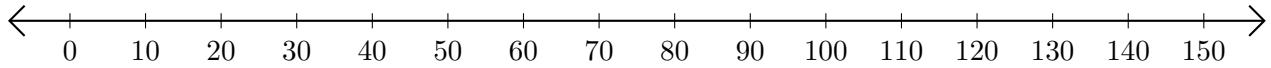


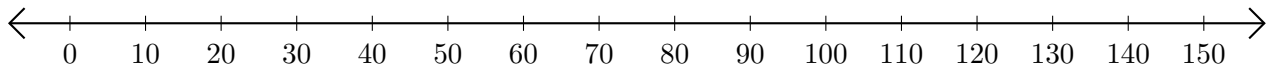
Adding on Number Lines (F)

Use the number lines to calculate each sum.

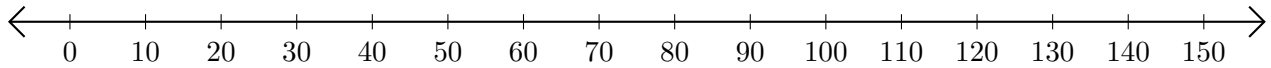
1. $80 + 20 = \underline{\hspace{2cm}}$



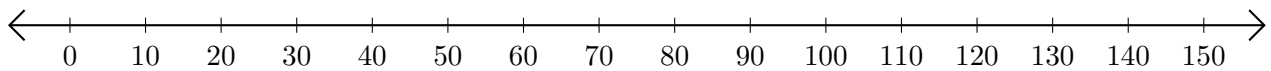
2. $50 + 90 = \underline{\hspace{2cm}}$



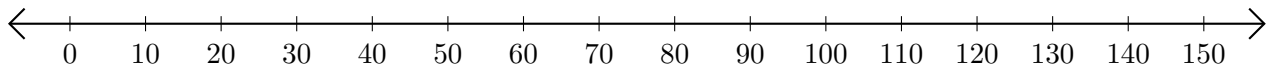
3. $40 + 60 = \underline{\hspace{2cm}}$



4. $120 + 20 = \underline{\hspace{2cm}}$



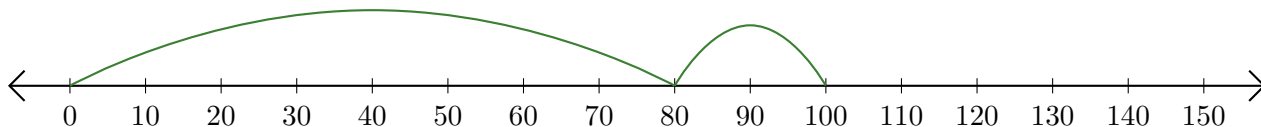
5. $100 + 30 = \underline{\hspace{2cm}}$



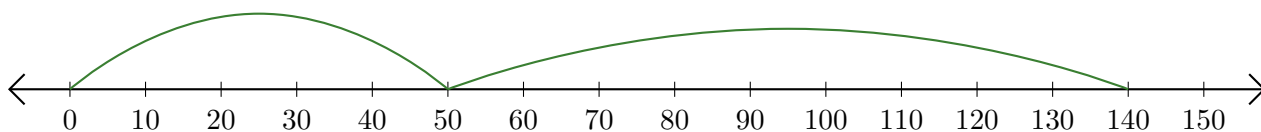
Adding on Number Lines (F) Answers

Use the number lines to calculate each sum.

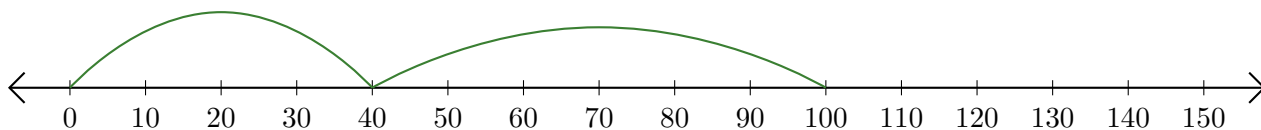
1. $80 + 20 = \underline{100}$



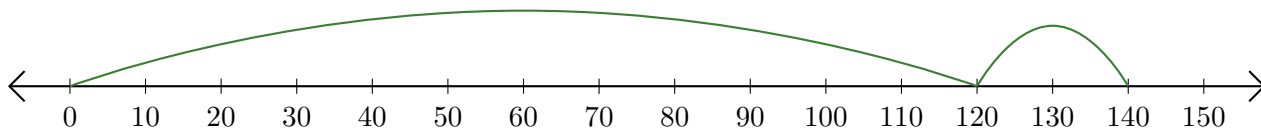
2. $50 + 90 = \underline{140}$



3. $40 + 60 = \underline{100}$



4. $120 + 20 = \underline{140}$



5. $100 + 30 = \underline{130}$

