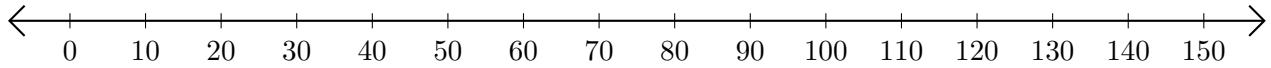


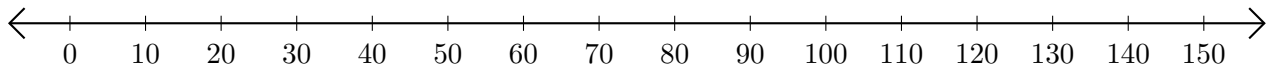
Adding on Number Lines (D)

Use the number lines to calculate each sum.

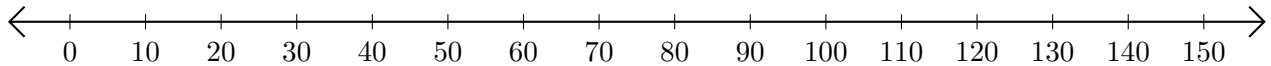
1. $50 + 20 = \underline{\quad}$



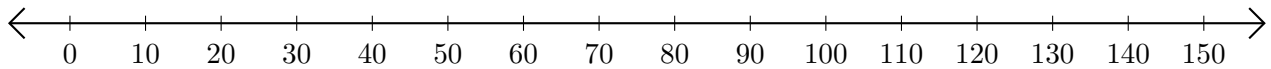
2. $10 + 90 = \underline{\quad}$



3. $130 + 20 = \underline{\quad}$



4. $60 + 10 = \underline{\quad}$



5. $110 + 40 = \underline{\quad}$

