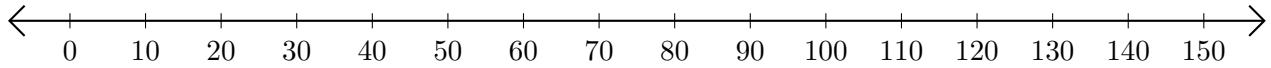


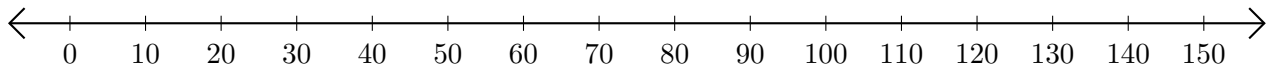
Adding on Number Lines (C)

Use the number lines to calculate each sum.

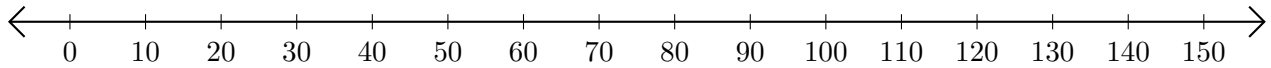
1. $70 + 10 = \underline{\quad}$



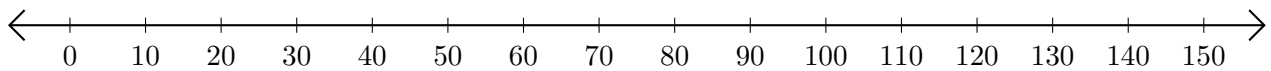
2. $130 + 10 = \underline{\quad}$



3. $10 + 30 = \underline{\quad}$



4. $100 + 10 = \underline{\quad}$



5. $110 + 30 = \underline{\quad}$

