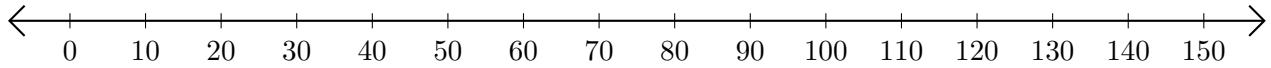


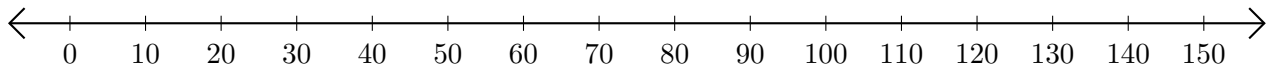
# Adding on Number Lines (C)

Use the number lines to calculate each sum.

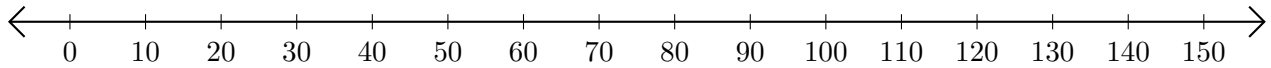
1.  $70 + 10 = \underline{\quad}$



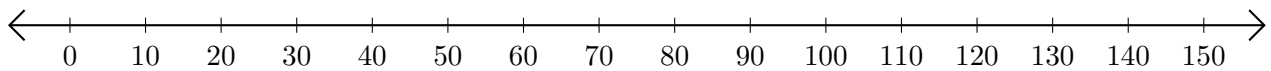
2.  $130 + 10 = \underline{\quad}$



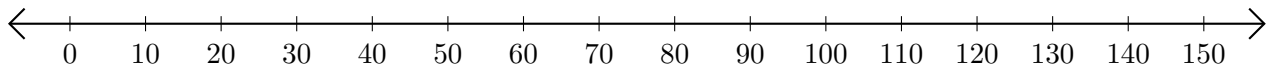
3.  $10 + 30 = \underline{\quad}$



4.  $100 + 10 = \underline{\quad}$



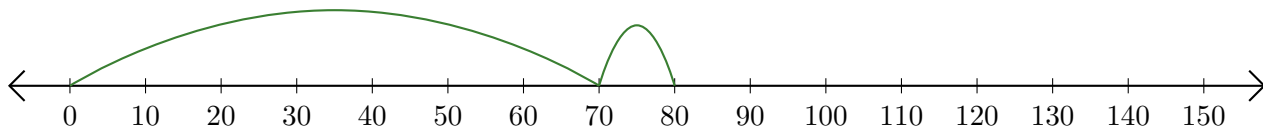
5.  $110 + 30 = \underline{\quad}$



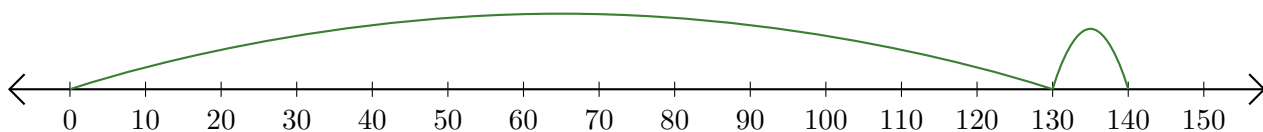
# Adding on Number Lines (C) Answers

Use the number lines to calculate each sum.

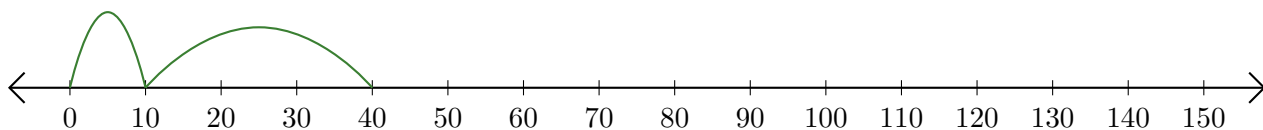
1.  $70 + 10 = \underline{80}$



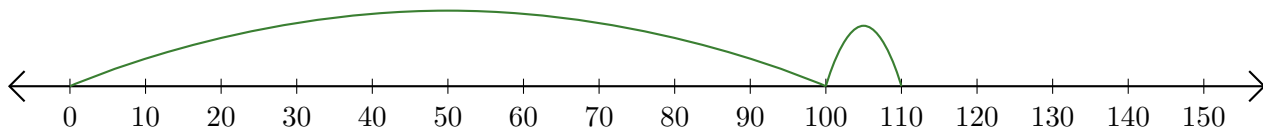
2.  $130 + 10 = \underline{140}$



3.  $10 + 30 = \underline{40}$



4.  $100 + 10 = \underline{110}$



5.  $110 + 30 = \underline{140}$

