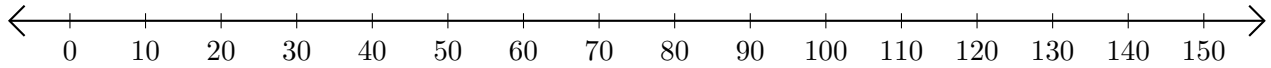


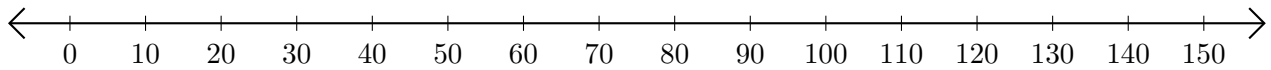
Adding on Number Lines (A)

Use the number lines to calculate each sum.

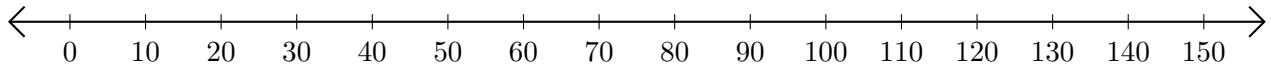
1. $90 + 20 = \underline{\hspace{2cm}}$



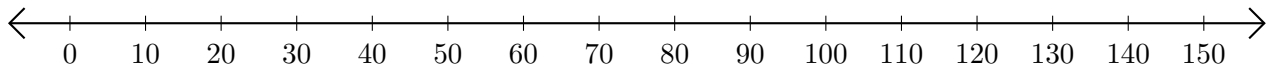
2. $120 + 30 = \underline{\hspace{2cm}}$



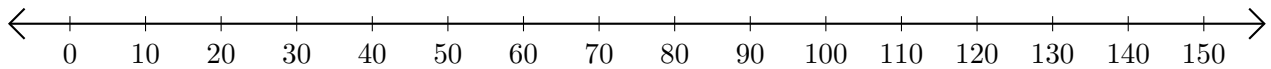
3. $60 + 10 = \underline{\hspace{2cm}}$



4. $40 + 90 = \underline{\hspace{2cm}}$



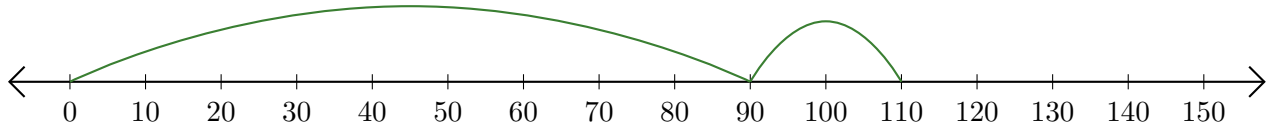
5. $100 + 30 = \underline{\hspace{2cm}}$



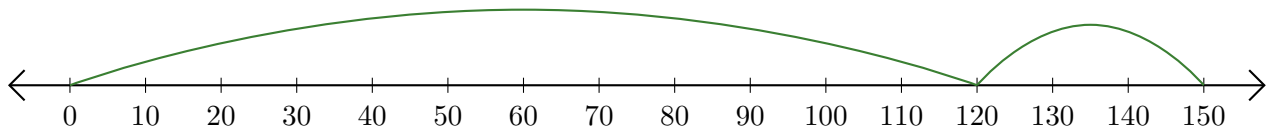
Adding on Number Lines (A) Answers

Use the number lines to calculate each sum.

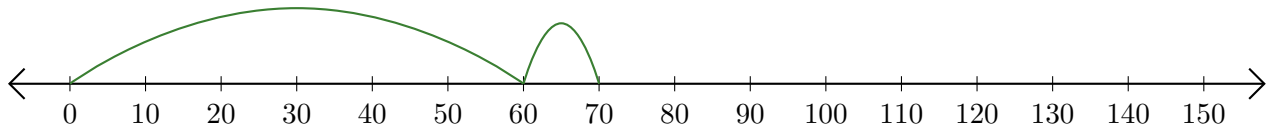
1. $90 + 20 = \underline{110}$



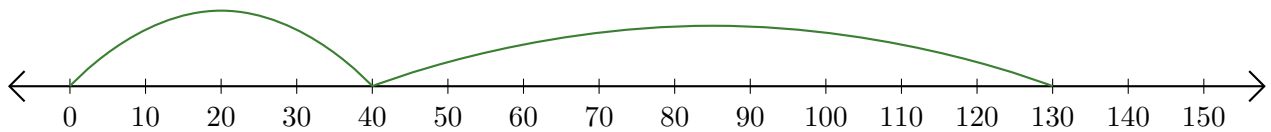
2. $120 + 30 = \underline{150}$



3. $60 + 10 = \underline{70}$



4. $40 + 90 = \underline{130}$



5. $100 + 30 = \underline{130}$

