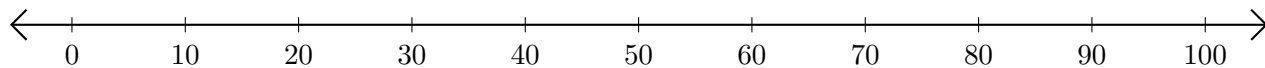


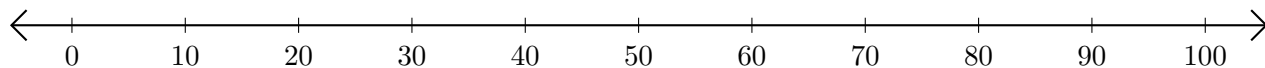
Adding on Number Lines (J)

Use the number lines to calculate each sum.

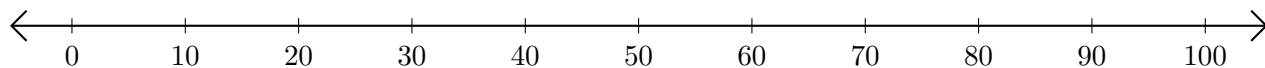
1. $30 + 10 = \underline{\quad}$



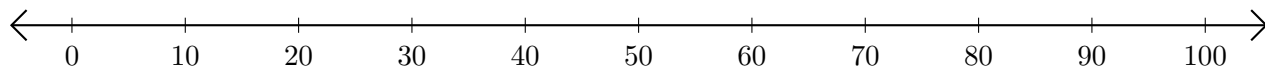
2. $40 + 40 = \underline{\quad}$



3. $80 + 10 = \underline{\quad}$



4. $10 + 10 = \underline{\quad}$



5. $50 + 40 = \underline{\quad}$

