

Adding on Number Lines (G)

Use the number lines to calculate each sum.

1. $20 + 10 = \underline{\quad}$



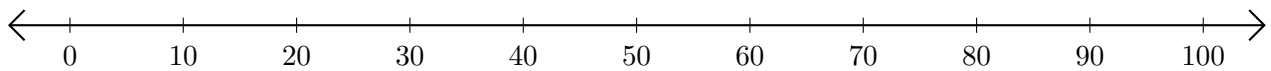
2. $40 + 20 = \underline{\quad}$



3. $80 + 10 = \underline{\quad}$



4. $10 + 60 = \underline{\quad}$



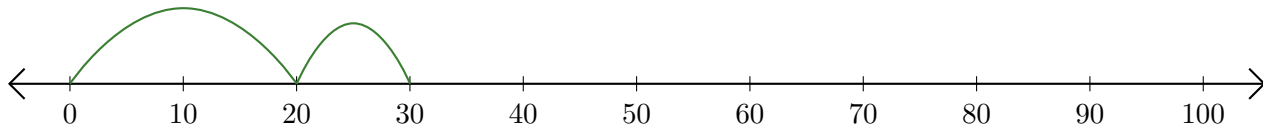
5. $50 + 40 = \underline{\quad}$



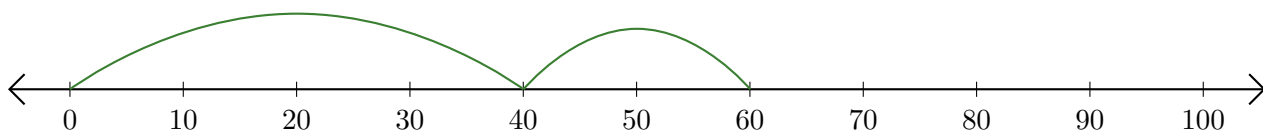
Adding on Number Lines (G) Answers

Use the number lines to calculate each sum.

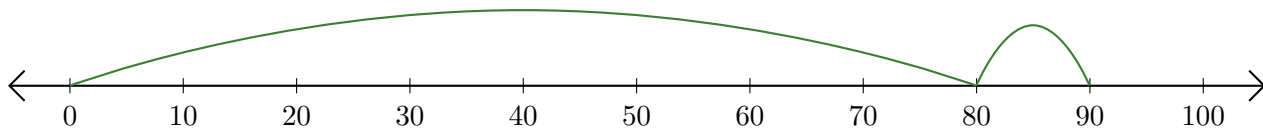
1. $20 + 10 = \underline{30}$



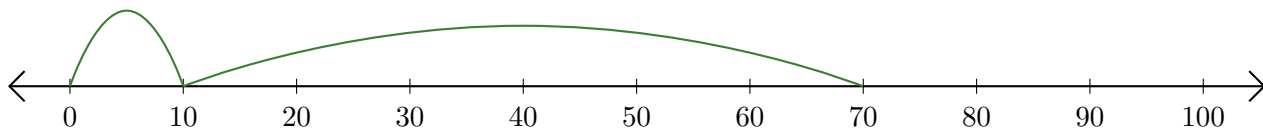
2. $40 + 20 = \underline{60}$



3. $80 + 10 = \underline{90}$



4. $10 + 60 = \underline{70}$



5. $50 + 40 = \underline{90}$

