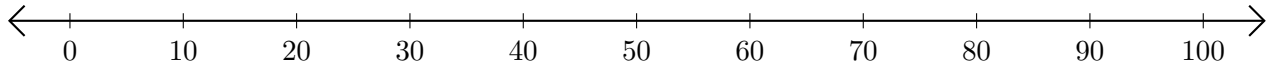


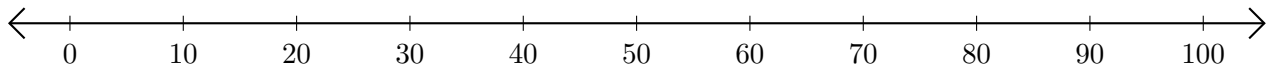
# Adding on Number Lines (F)

Use the number lines to calculate each sum.

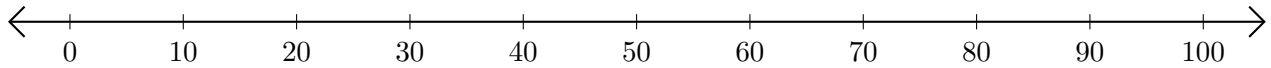
1.  $70 + 20 = \underline{\quad}$



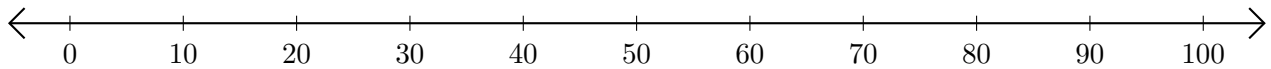
2.  $50 + 50 = \underline{\quad}$



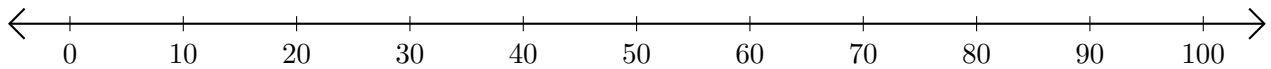
3.  $30 + 70 = \underline{\quad}$



4.  $10 + 40 = \underline{\quad}$



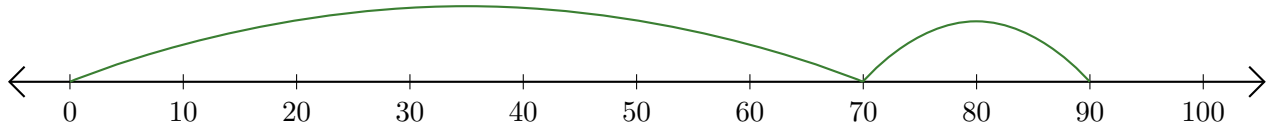
5.  $60 + 20 = \underline{\quad}$



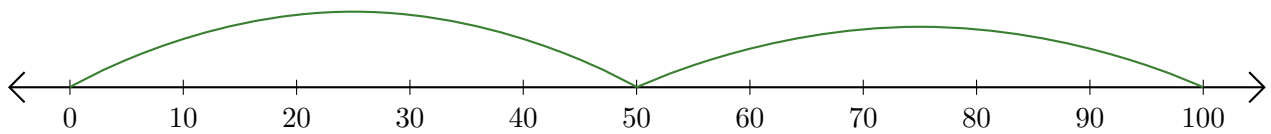
# Adding on Number Lines (F) Answers

Use the number lines to calculate each sum.

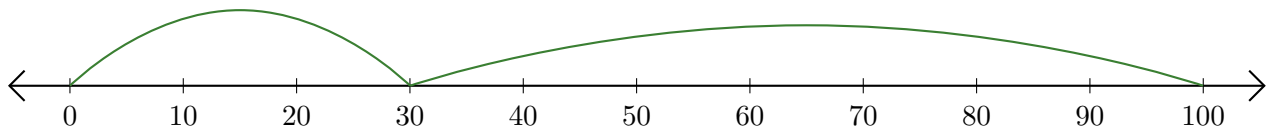
1.  $70 + 20 = \underline{90}$



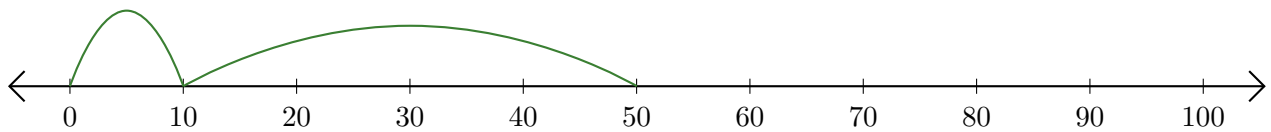
2.  $50 + 50 = \underline{100}$



3.  $30 + 70 = \underline{100}$



4.  $10 + 40 = \underline{50}$



5.  $60 + 20 = \underline{80}$

