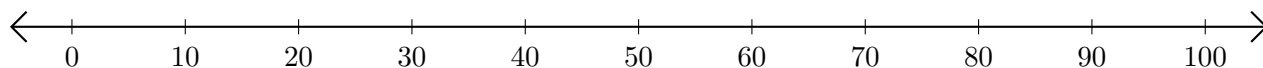


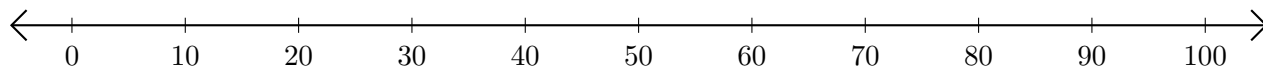
Adding on Number Lines (E)

Use the number lines to calculate each sum.

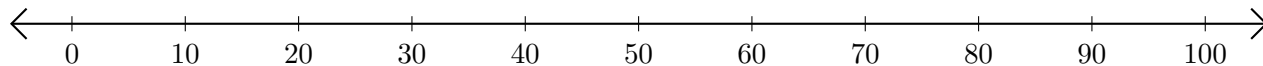
1. $90 + 10 = \underline{\quad}$



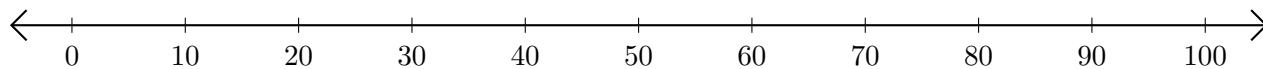
2. $80 + 10 = \underline{\quad}$



3. $50 + 20 = \underline{\quad}$



4. $30 + 50 = \underline{\quad}$



5. $20 + 10 = \underline{\quad}$

