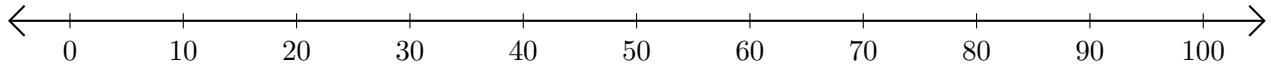


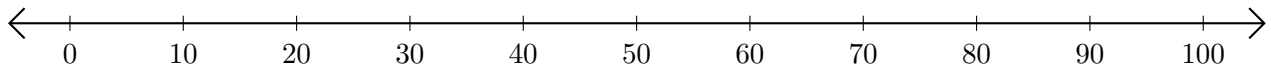
# Adding on Number Lines (E)

Use the number lines to calculate each sum.

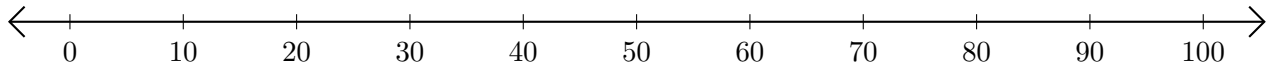
1.  $90 + 10 = \underline{\quad}$



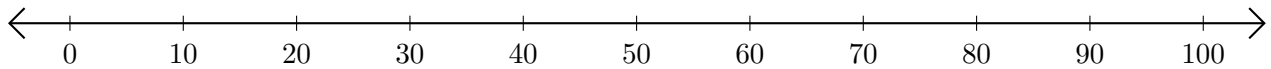
2.  $80 + 10 = \underline{\quad}$



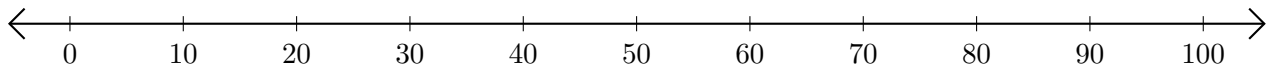
3.  $50 + 20 = \underline{\quad}$



4.  $30 + 50 = \underline{\quad}$



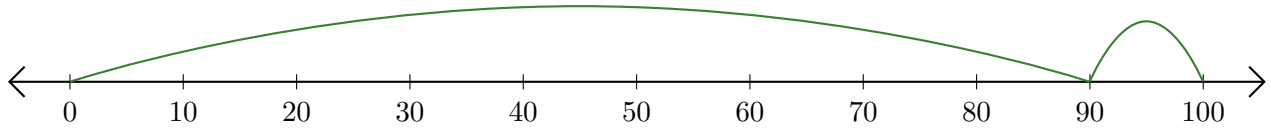
5.  $20 + 10 = \underline{\quad}$



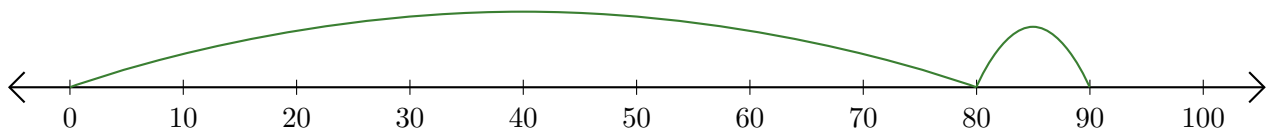
# Adding on Number Lines (E) Answers

Use the number lines to calculate each sum.

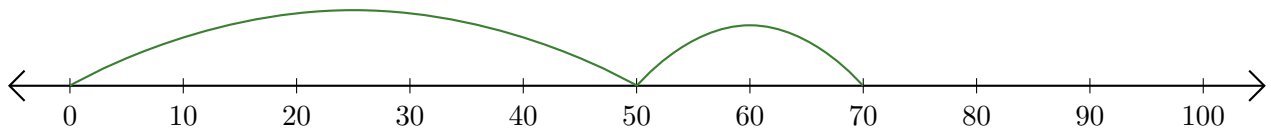
1.  $90 + 10 = \underline{100}$



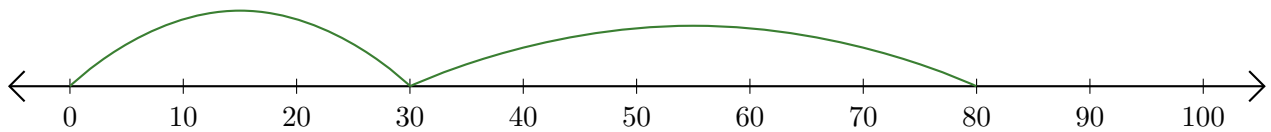
2.  $80 + 10 = \underline{90}$



3.  $50 + 20 = \underline{70}$



4.  $30 + 50 = \underline{80}$



5.  $20 + 10 = \underline{30}$

