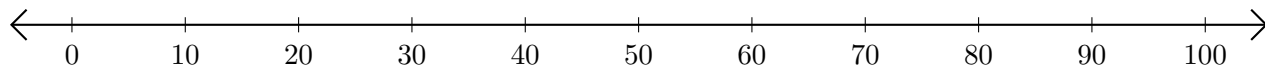


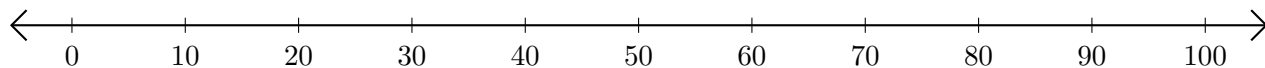
Adding on Number Lines (B)

Use the number lines to calculate each sum.

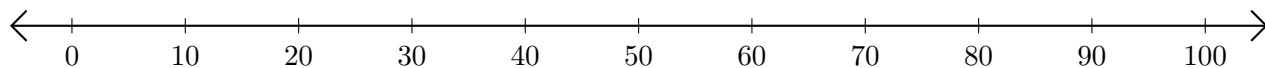
1. $90 + 10 = \underline{\quad}$



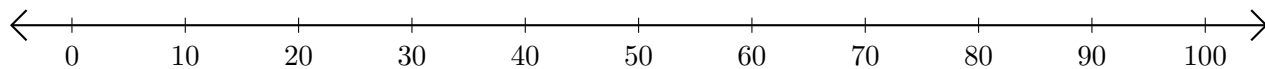
2. $80 + 10 = \underline{\quad}$



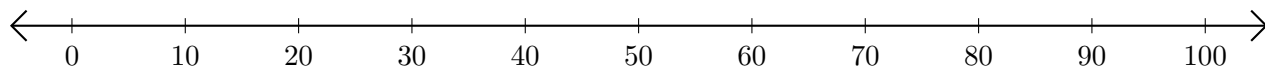
3. $40 + 10 = \underline{\quad}$



4. $10 + 10 = \underline{\quad}$



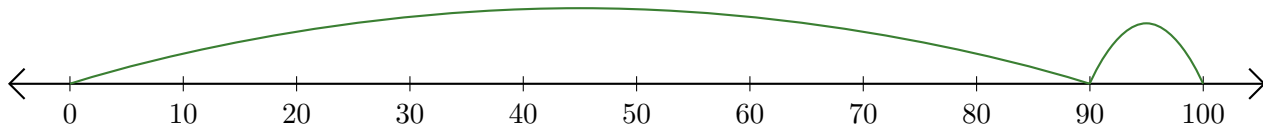
5. $60 + 40 = \underline{\quad}$



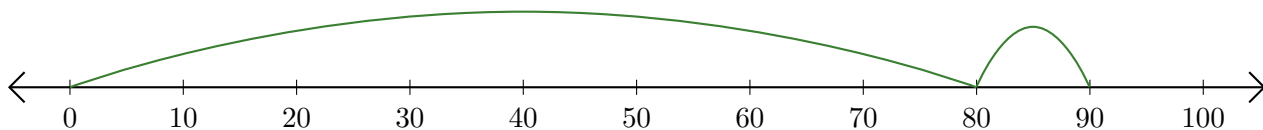
Adding on Number Lines (B) Answers

Use the number lines to calculate each sum.

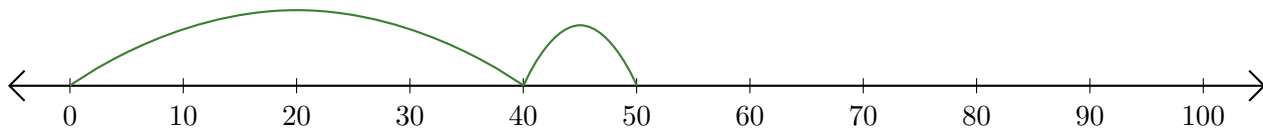
1. $90 + 10 = \underline{100}$



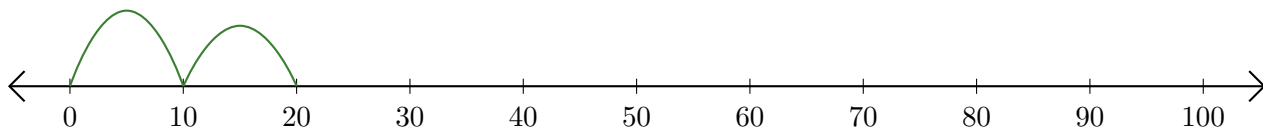
2. $80 + 10 = \underline{90}$



3. $40 + 10 = \underline{50}$



4. $10 + 10 = \underline{20}$



5. $60 + 40 = \underline{100}$

