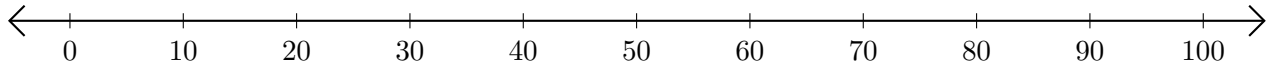


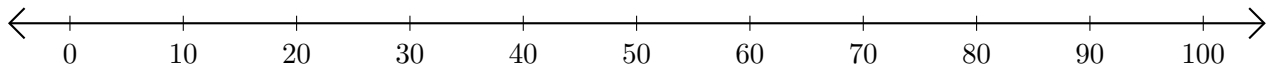
Adding on Number Lines (A)

Use the number lines to calculate each sum.

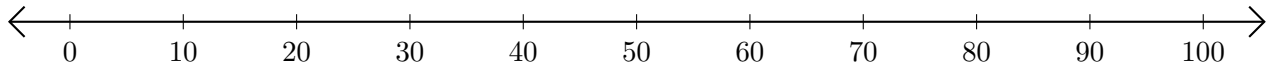
1. $20 + 10 = \underline{\quad}$



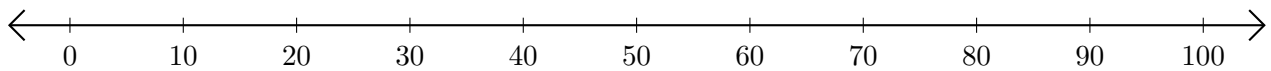
2. $70 + 30 = \underline{\quad}$



3. $30 + 10 = \underline{\quad}$



4. $10 + 80 = \underline{\quad}$



5. $60 + 20 = \underline{\quad}$

