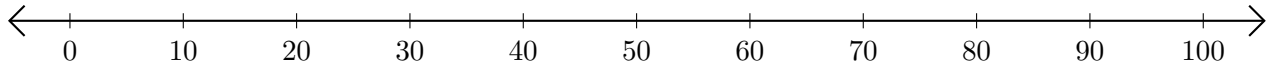


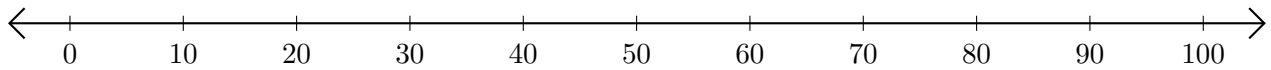
# Adding on Number Lines (A)

Use the number lines to calculate each sum.

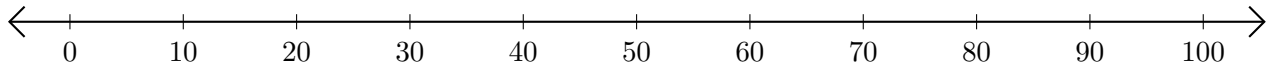
1.  $20 + 10 = \underline{\quad}$



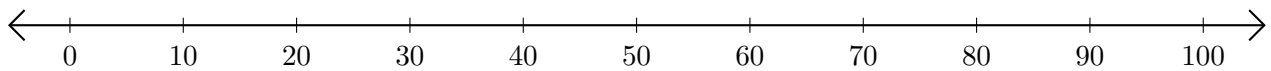
2.  $70 + 30 = \underline{\quad}$



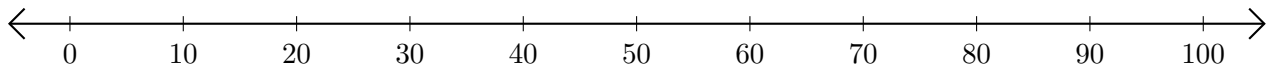
3.  $30 + 10 = \underline{\quad}$



4.  $10 + 80 = \underline{\quad}$



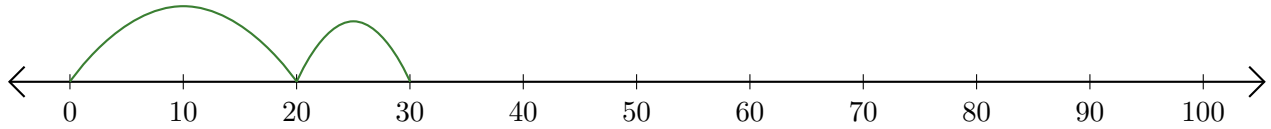
5.  $60 + 20 = \underline{\quad}$



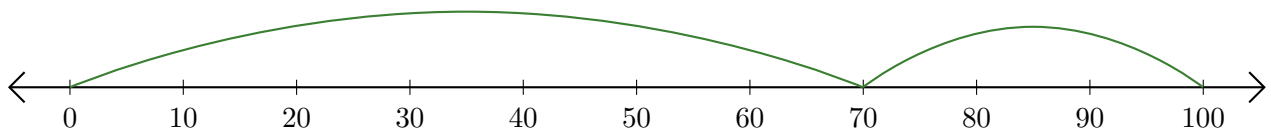
# Adding on Number Lines (A) Answers

Use the number lines to calculate each sum.

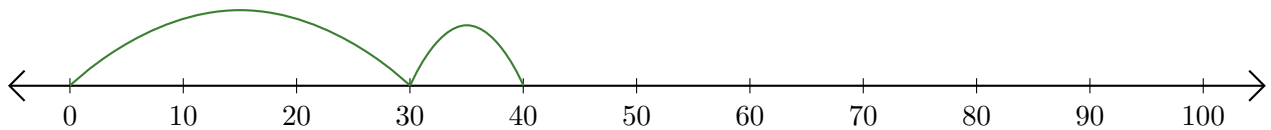
1.  $20 + 10 = \underline{30}$



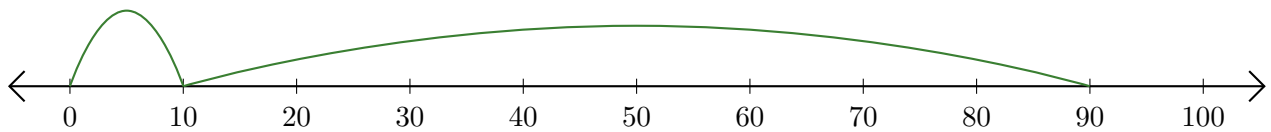
2.  $70 + 30 = \underline{100}$



3.  $30 + 10 = \underline{40}$



4.  $10 + 80 = \underline{90}$



5.  $60 + 20 = \underline{80}$

