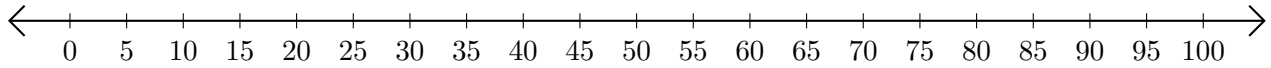


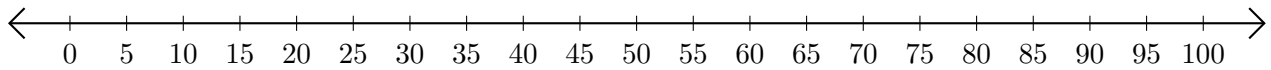
Adding on Number Lines (J)

Use the number lines to calculate each sum.

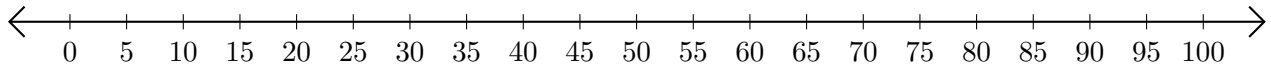
1. $45 + 30 = \underline{\quad}$



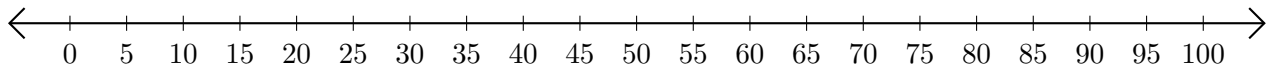
2. $70 + 25 = \underline{\quad}$



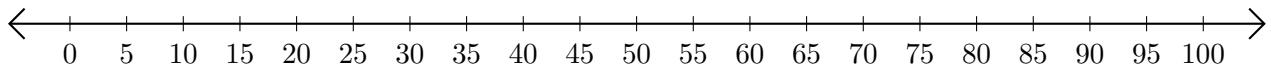
3. $40 + 60 = \underline{\quad}$



4. $15 + 5 = \underline{\quad}$



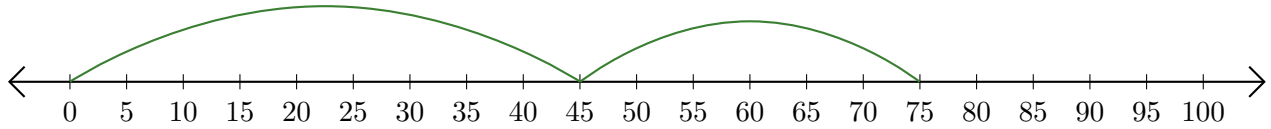
5. $60 + 5 = \underline{\quad}$



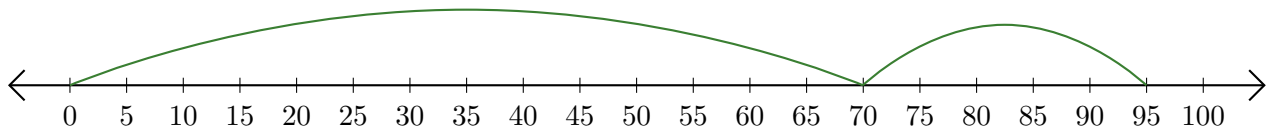
Adding on Number Lines (J) Answers

Use the number lines to calculate each sum.

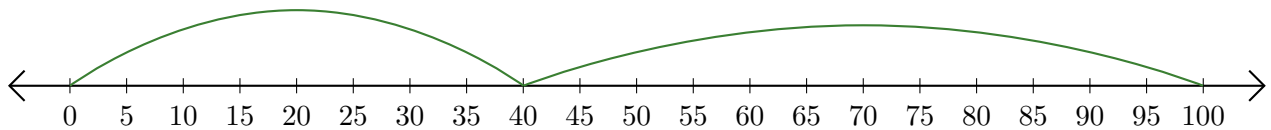
1. $45 + 30 = \underline{75}$



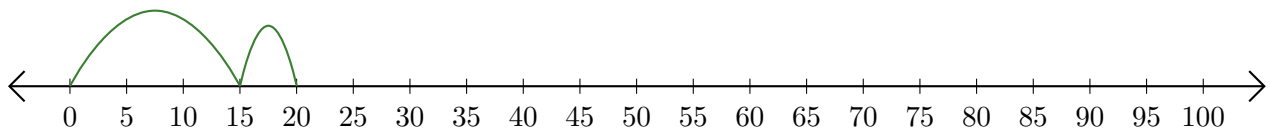
2. $70 + 25 = \underline{95}$



3. $40 + 60 = \underline{100}$



4. $15 + 5 = \underline{20}$



5. $60 + 5 = \underline{65}$

