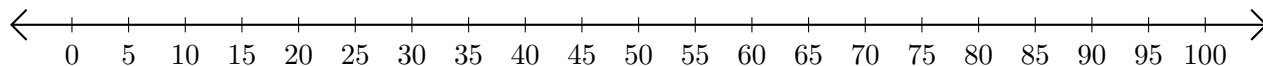


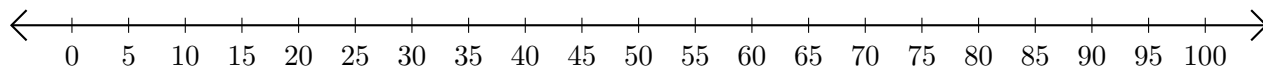
Adding on Number Lines (I)

Use the number lines to calculate each sum.

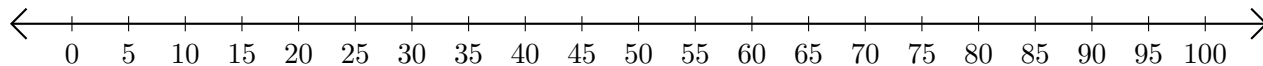
1. $30 + 40 = \underline{\quad}$



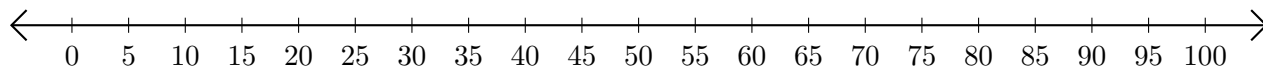
2. $60 + 35 = \underline{\quad}$



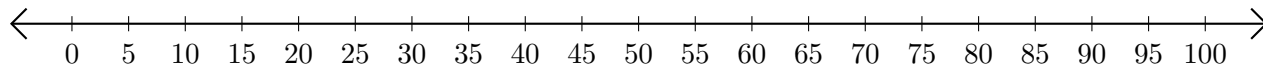
3. $65 + 30 = \underline{\quad}$



4. $55 + 15 = \underline{\quad}$



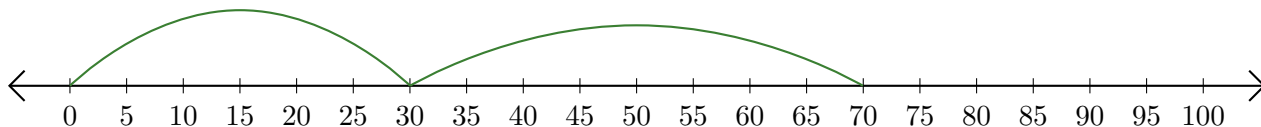
5. $5 + 90 = \underline{\quad}$



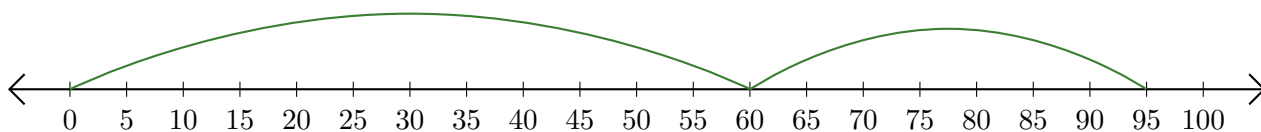
Adding on Number Lines (I) Answers

Use the number lines to calculate each sum.

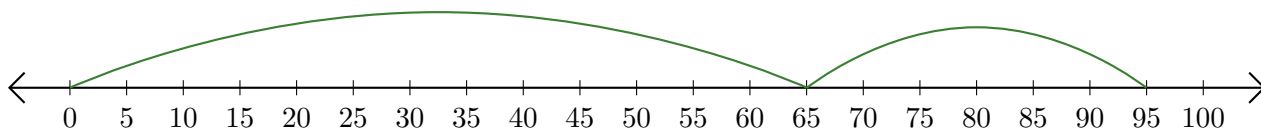
1. $30 + 40 = \underline{70}$



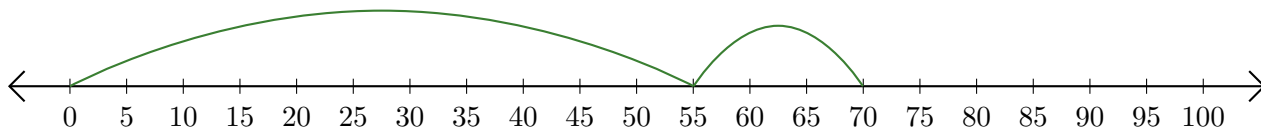
2. $60 + 35 = \underline{95}$



3. $65 + 30 = \underline{95}$



4. $55 + 15 = \underline{70}$



5. $5 + 90 = \underline{95}$

