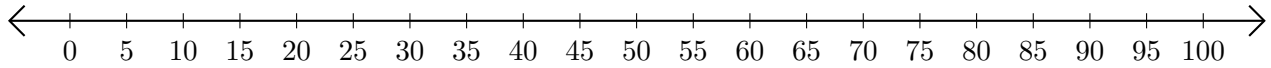


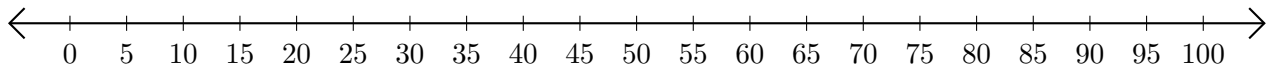
# Adding on Number Lines (H)

Use the number lines to calculate each sum.

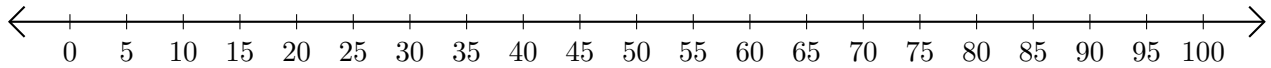
1.  $55 + 45 = \underline{\hspace{2cm}}$



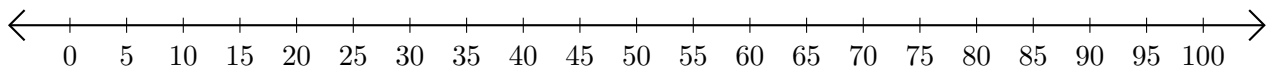
2.  $90 + 5 = \underline{\hspace{2cm}}$



3.  $5 + 5 = \underline{\hspace{2cm}}$



4.  $35 + 45 = \underline{\hspace{2cm}}$



5.  $65 + 10 = \underline{\hspace{2cm}}$

