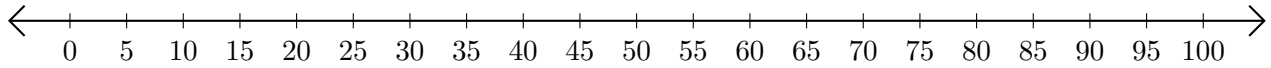


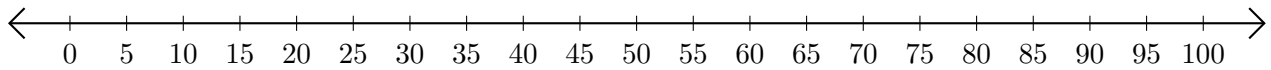
Adding on Number Lines (H)

Use the number lines to calculate each sum.

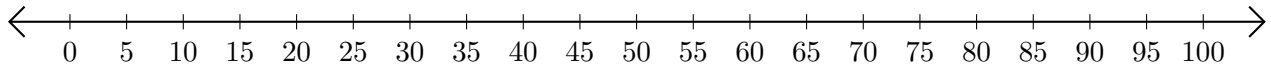
1. $55 + 45 = \underline{\quad}$



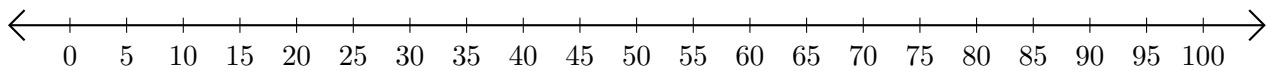
2. $90 + 5 = \underline{\quad}$



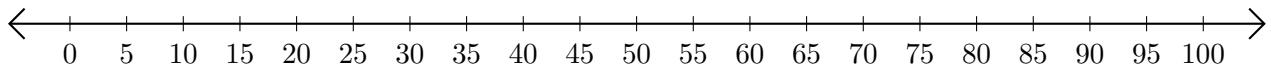
3. $5 + 5 = \underline{\quad}$



4. $35 + 45 = \underline{\quad}$



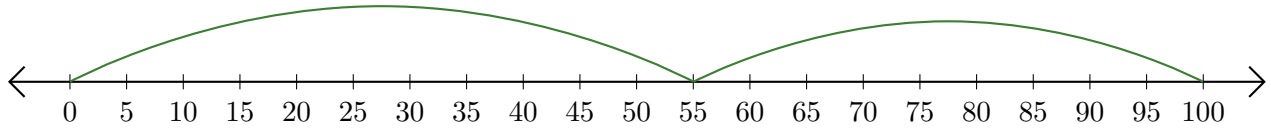
5. $65 + 10 = \underline{\quad}$



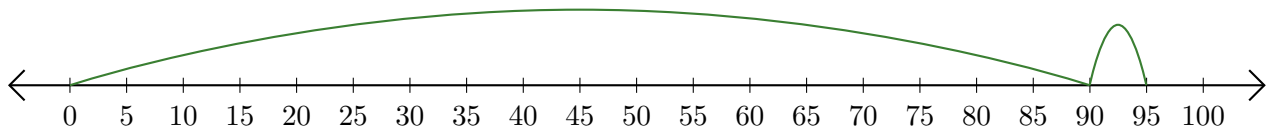
Adding on Number Lines (H) Answers

Use the number lines to calculate each sum.

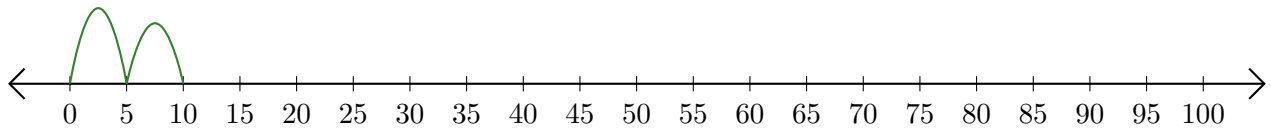
1. $55 + 45 = \underline{100}$



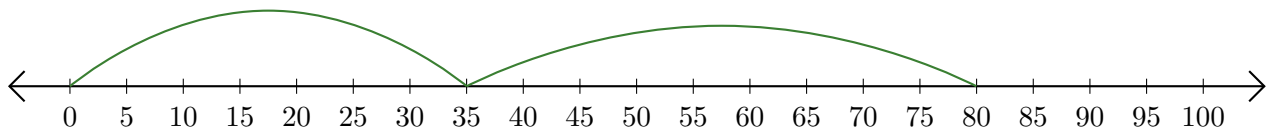
2. $90 + 5 = \underline{95}$



3. $5 + 5 = \underline{10}$



4. $35 + 45 = \underline{80}$



5. $65 + 10 = \underline{75}$

