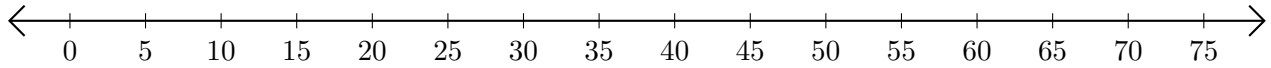


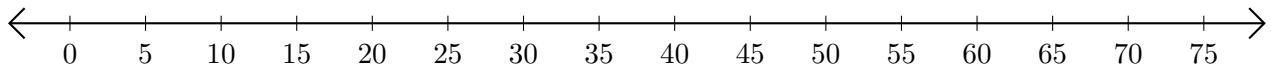
Adding on Number Lines (F)

Use the number lines to calculate each sum.

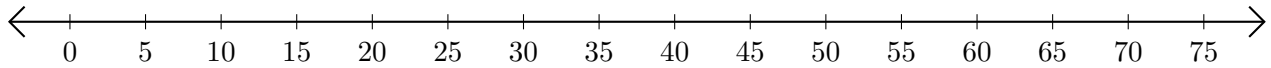
1. $40 + 5 = \underline{\quad}$



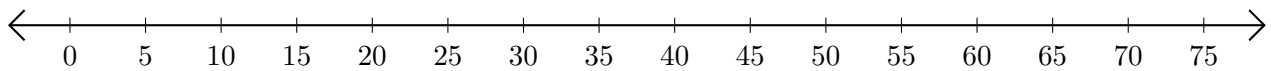
2. $35 + 35 = \underline{\quad}$



3. $25 + 25 = \underline{\quad}$



4. $15 + 15 = \underline{\quad}$



5. $30 + 35 = \underline{\quad}$

