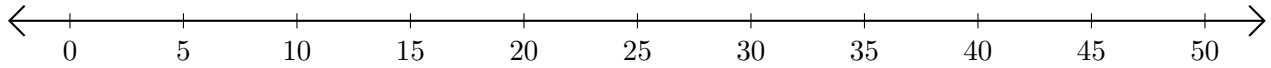


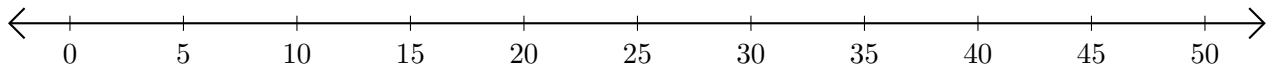
Adding on Number Lines (J)

Use the number lines to calculate each sum.

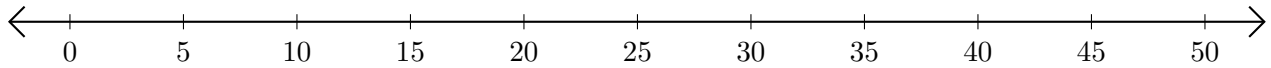
1. $5 + 10 = \underline{\quad}$



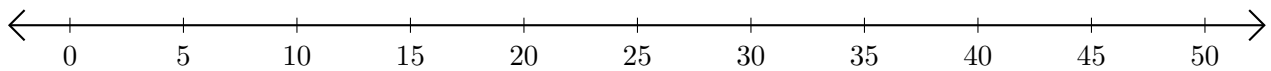
2. $40 + 5 = \underline{\quad}$



3. $15 + 20 = \underline{\quad}$



4. $30 + 5 = \underline{\quad}$



5. $10 + 30 = \underline{\quad}$

