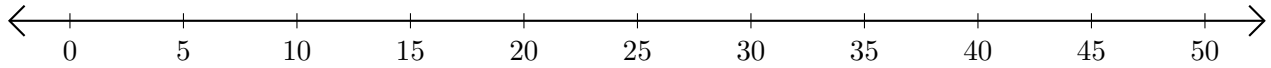


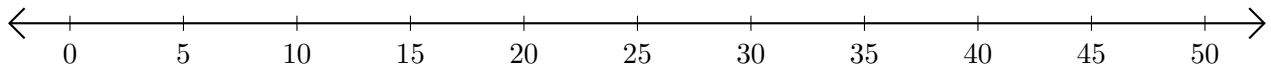
# Adding on Number Lines (J)

Use the number lines to calculate each sum.

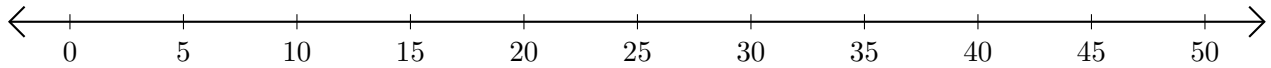
1.  $5 + 10 = \underline{\quad}$



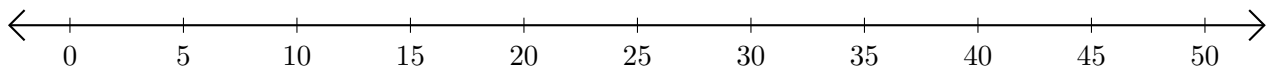
2.  $40 + 5 = \underline{\quad}$



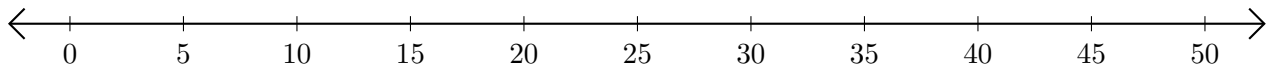
3.  $15 + 20 = \underline{\quad}$



4.  $30 + 5 = \underline{\quad}$



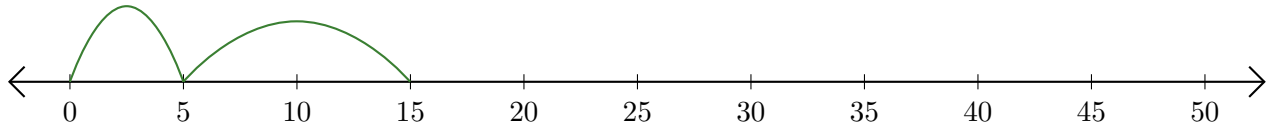
5.  $10 + 30 = \underline{\quad}$



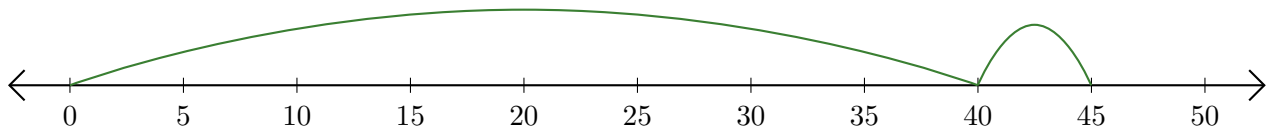
# Adding on Number Lines (J) Answers

Use the number lines to calculate each sum.

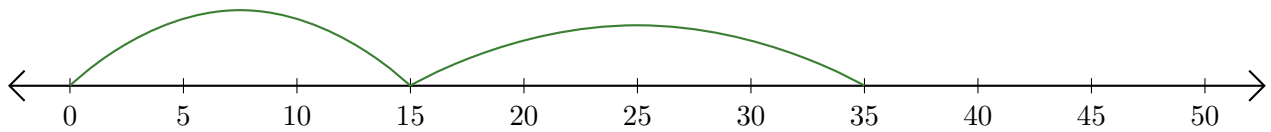
1.  $5 + 10 = \underline{15}$



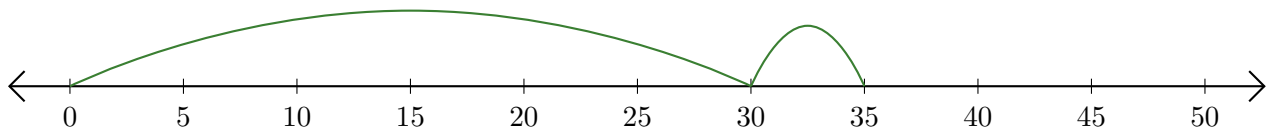
2.  $40 + 5 = \underline{45}$



3.  $15 + 20 = \underline{35}$



4.  $30 + 5 = \underline{35}$



5.  $10 + 30 = \underline{40}$

