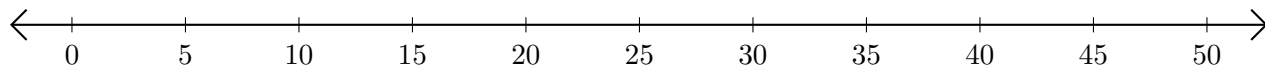


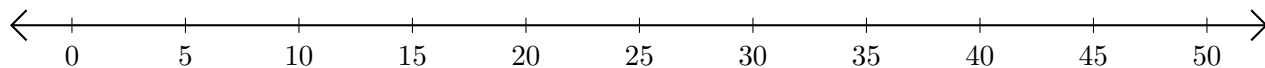
Adding on Number Lines (B)

Use the number lines to calculate each sum.

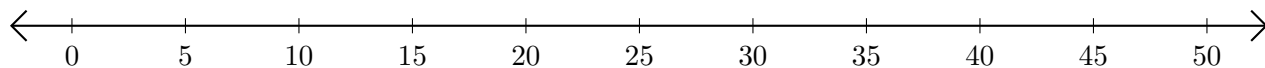
1. $10 + 40 = \underline{\quad}$



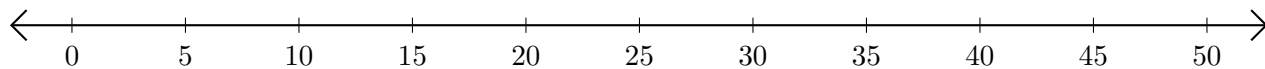
2. $35 + 10 = \underline{\quad}$



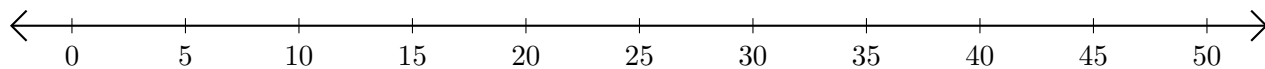
3. $40 + 10 = \underline{\quad}$



4. $15 + 25 = \underline{\quad}$



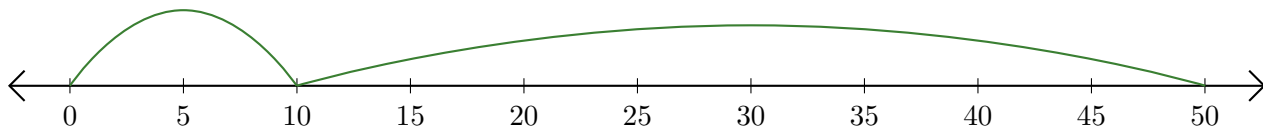
5. $5 + 15 = \underline{\quad}$



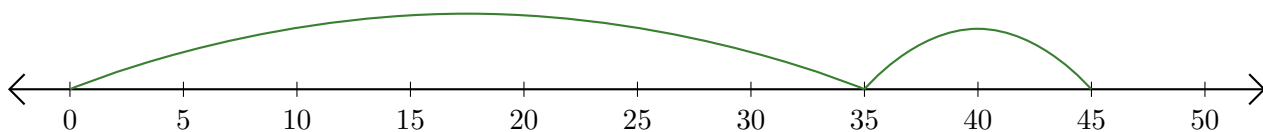
Adding on Number Lines (B) Answers

Use the number lines to calculate each sum.

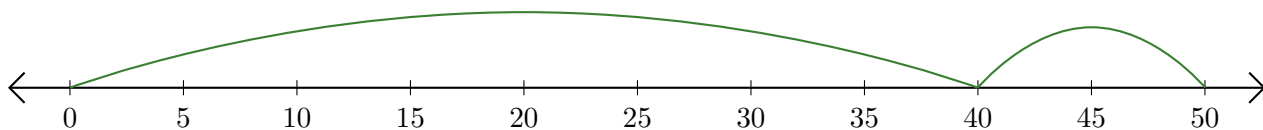
1. $10 + 40 = \underline{50}$



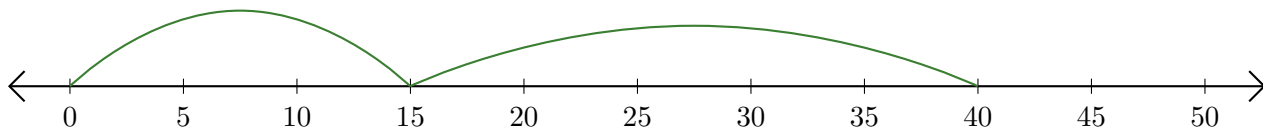
2. $35 + 10 = \underline{45}$



3. $40 + 10 = \underline{50}$



4. $15 + 25 = \underline{40}$



5. $5 + 15 = \underline{20}$

