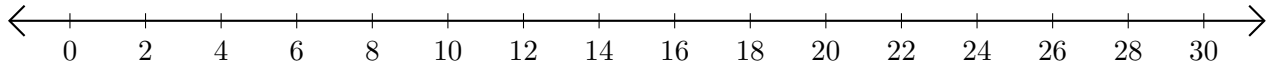


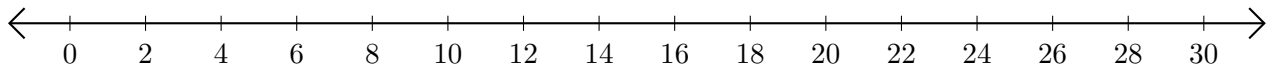
# Adding on Number Lines (H)

Use the number lines to calculate each sum.

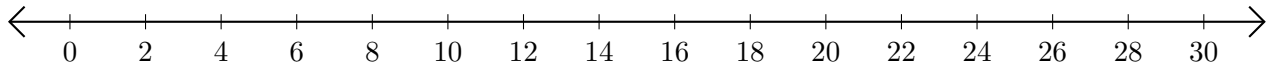
1.  $6 + 4 = \underline{\quad}$



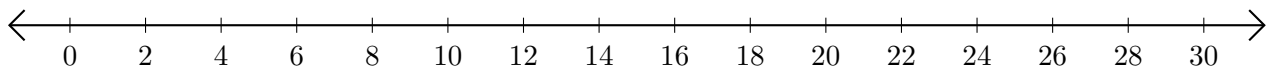
2.  $20 + 4 = \underline{\quad}$



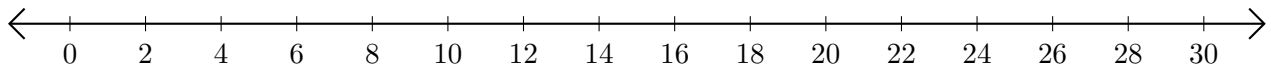
3.  $28 + 2 = \underline{\quad}$



4.  $24 + 4 = \underline{\quad}$




5.  $16 + 10 = \underline{\quad}$



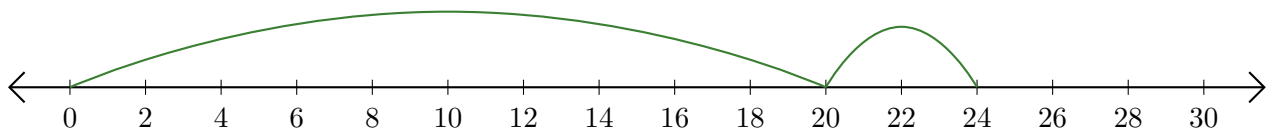
# Adding on Number Lines (H) Answers

Use the number lines to calculate each sum.

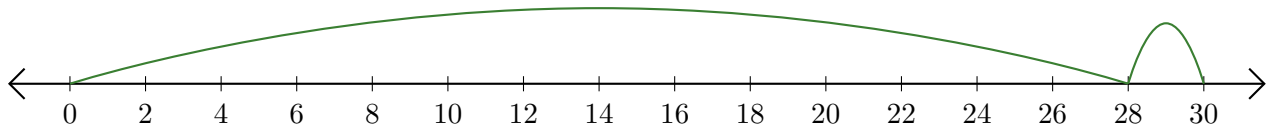
1.  $6 + 4 = \underline{10}$



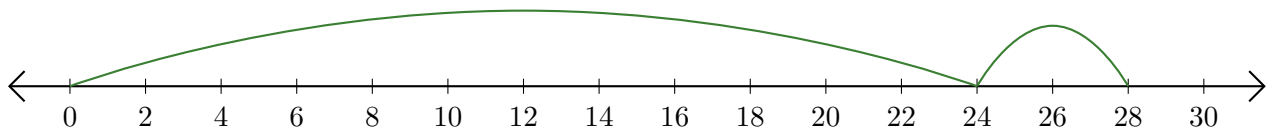
2.  $20 + 4 = \underline{24}$



3.  $28 + 2 = \underline{30}$



4.  $24 + 4 = \underline{28}$



5.  $16 + 10 = \underline{26}$

