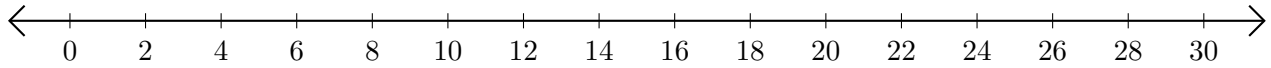


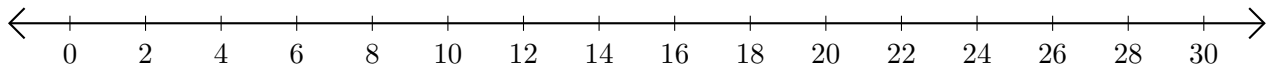
Adding on Number Lines (F)

Use the number lines to calculate each sum.

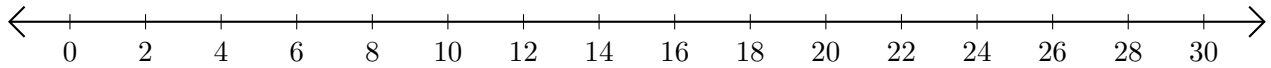
1. $16 + 10 = \underline{\quad}$



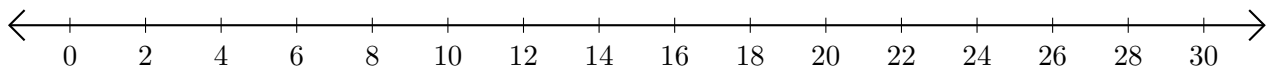
2. $28 + 2 = \underline{\quad}$



3. $12 + 14 = \underline{\quad}$



4. $6 + 14 = \underline{\quad}$



5. $18 + 4 = \underline{\quad}$

