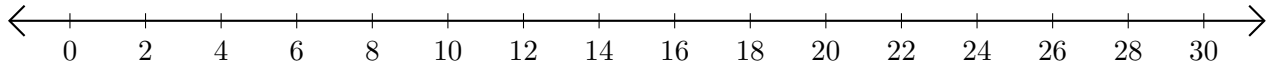


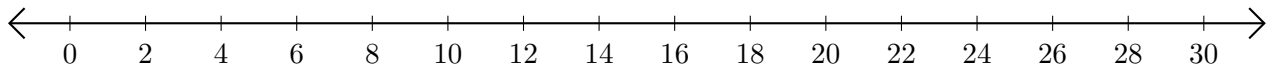
# Adding on Number Lines (F)

Use the number lines to calculate each sum.

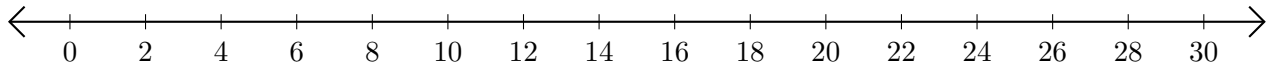
1.  $16 + 10 = \underline{\quad}$



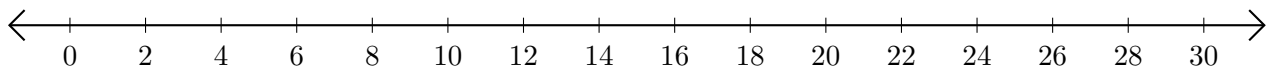
2.  $28 + 2 = \underline{\quad}$



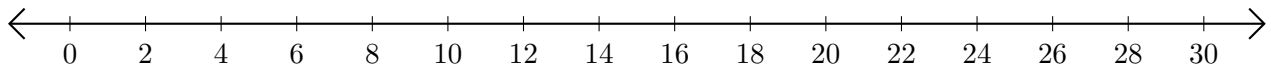
3.  $12 + 14 = \underline{\quad}$



4.  $6 + 14 = \underline{\quad}$



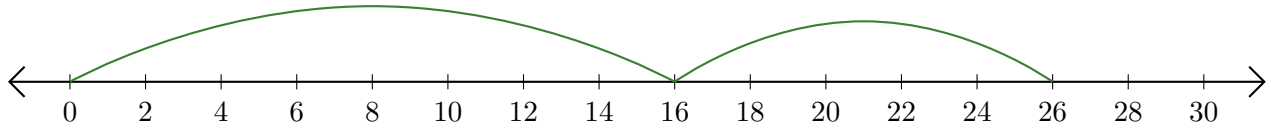
5.  $18 + 4 = \underline{\quad}$



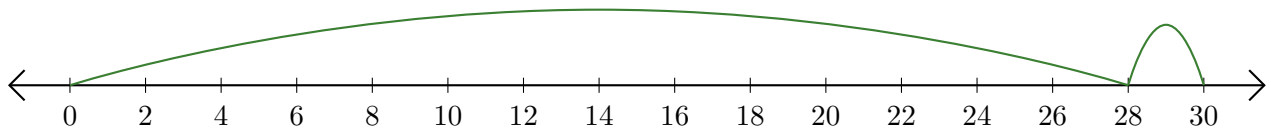
# Adding on Number Lines (F) Answers

Use the number lines to calculate each sum.

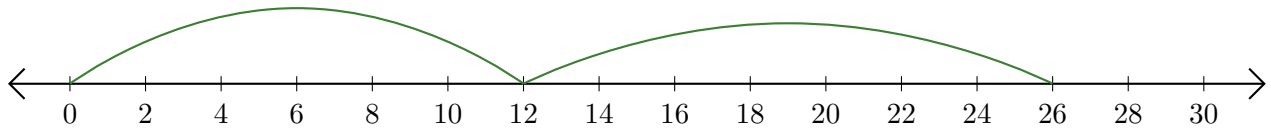
1.  $16 + 10 = \underline{26}$



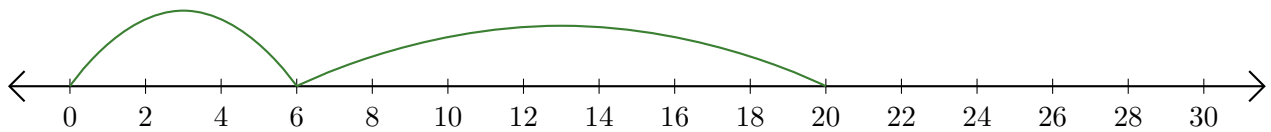
2.  $28 + 2 = \underline{30}$



3.  $12 + 14 = \underline{26}$



4.  $6 + 14 = \underline{20}$



5.  $18 + 4 = \underline{22}$

