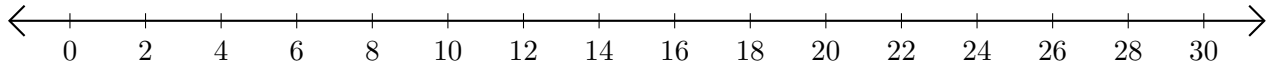


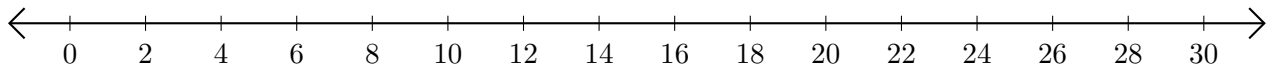
Adding on Number Lines (D)

Use the number lines to calculate each sum.

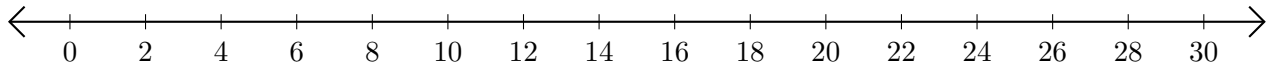
1. $16 + 6 = \underline{\quad}$



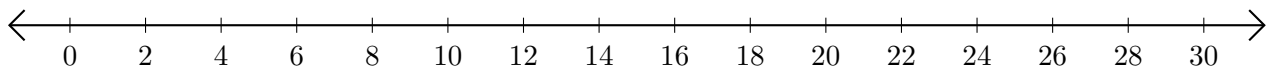
2. $22 + 4 = \underline{\quad}$



3. $14 + 8 = \underline{\quad}$



4. $28 + 2 = \underline{\quad}$



5. $26 + 4 = \underline{\quad}$

