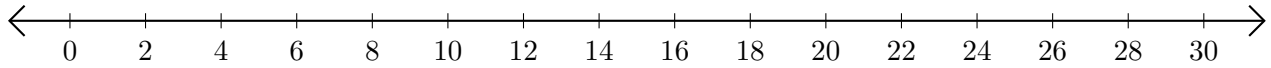


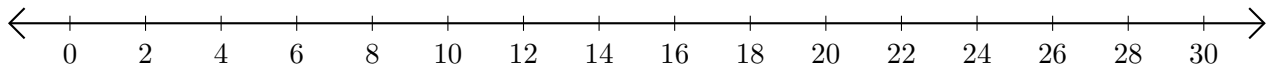
# Adding on Number Lines (C)

Use the number lines to calculate each sum.

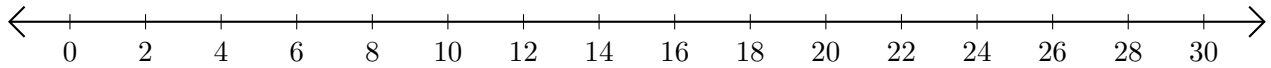
1.  $14 + 8 = \underline{\quad}$



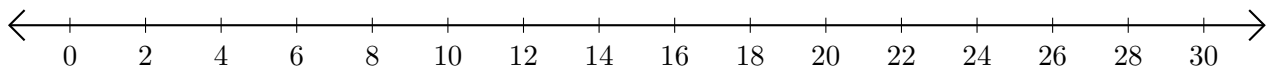
2.  $24 + 6 = \underline{\quad}$



3.  $8 + 20 = \underline{\quad}$



4.  $16 + 8 = \underline{\quad}$



5.  $22 + 4 = \underline{\quad}$

