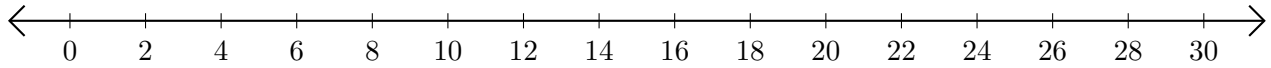


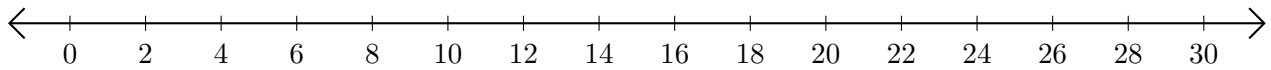
Adding on Number Lines (C)

Use the number lines to calculate each sum.

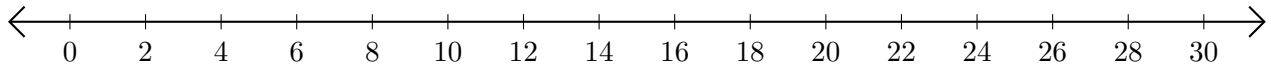
1. $14 + 8 = \underline{\quad}$



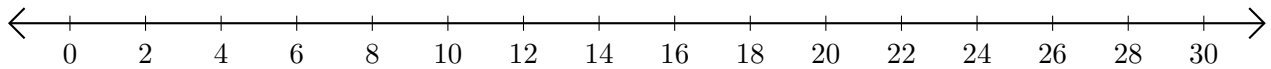
2. $24 + 6 = \underline{\quad}$



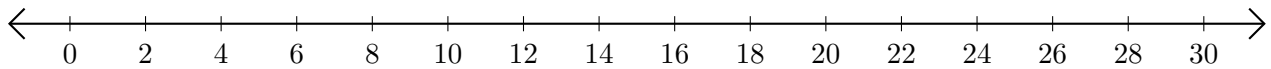
3. $8 + 20 = \underline{\quad}$



4. $16 + 8 = \underline{\quad}$



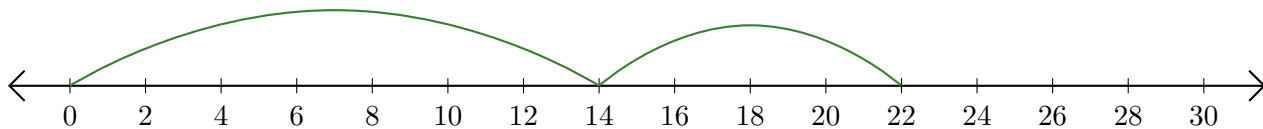
5. $22 + 4 = \underline{\quad}$



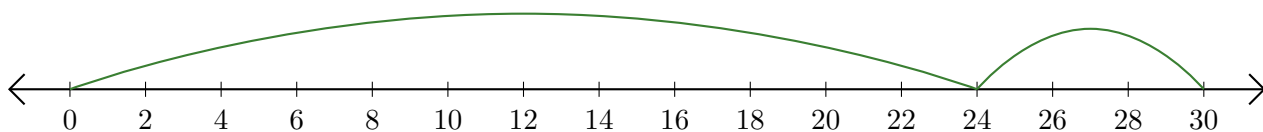
Adding on Number Lines (C) Answers

Use the number lines to calculate each sum.

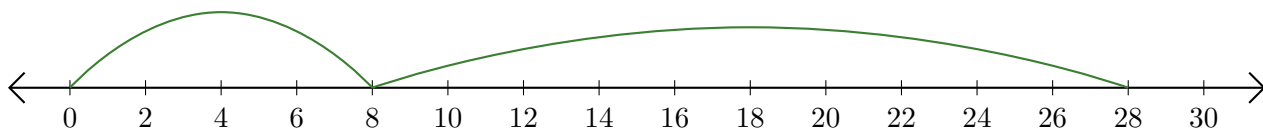
1. $14 + 8 = \underline{22}$



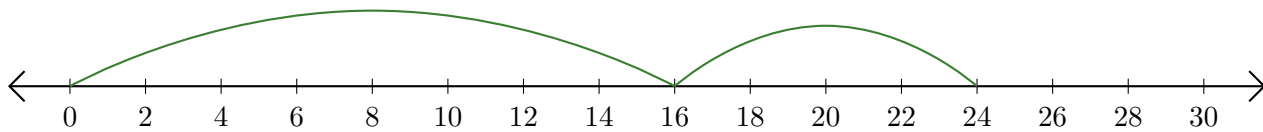
2. $24 + 6 = \underline{30}$



3. $8 + 20 = \underline{28}$



4. $16 + 8 = \underline{24}$



5. $22 + 4 = \underline{26}$

