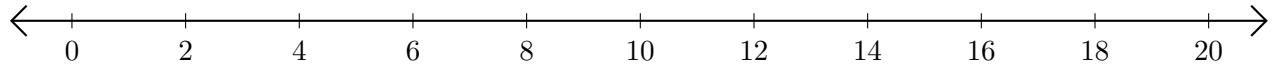


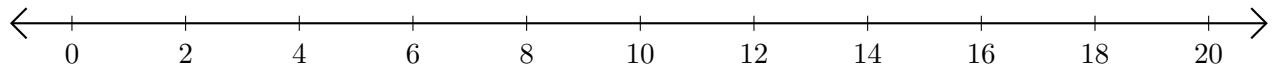
Adding on Number Lines (H)

Use the number lines to calculate each sum.

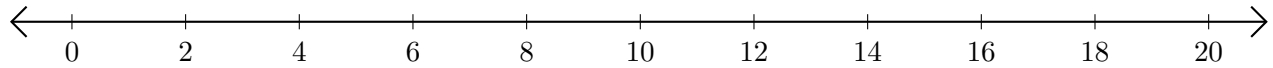
1. $16 + 2 = \underline{\quad}$



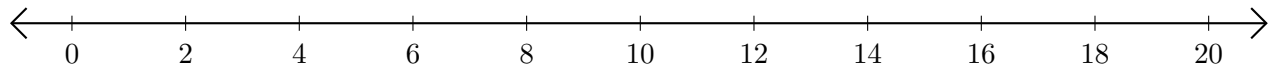
2. $6 + 2 = \underline{\quad}$



3. $10 + 4 = \underline{\quad}$



4. $14 + 6 = \underline{\quad}$



5. $2 + 4 = \underline{\quad}$

