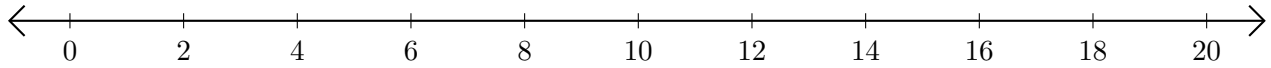


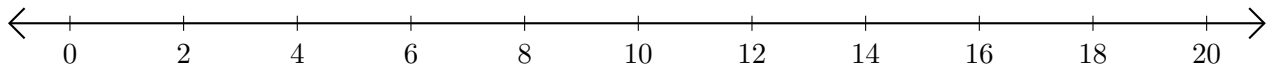
Adding on Number Lines (H)

Use the number lines to calculate each sum.

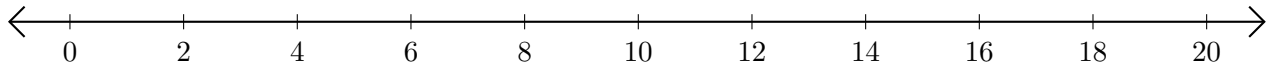
1. $16 + 2 = \underline{\quad}$



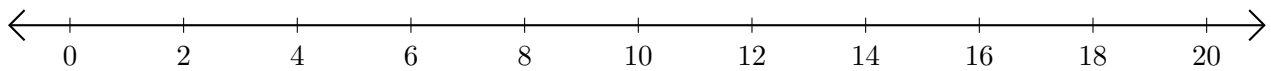
2. $6 + 2 = \underline{\quad}$



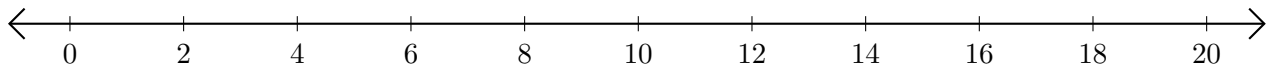
3. $10 + 4 = \underline{\quad}$



4. $14 + 6 = \underline{\quad}$



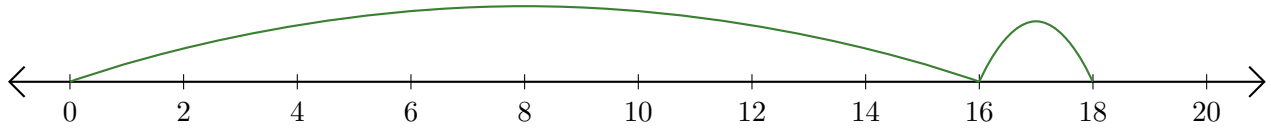
5. $2 + 4 = \underline{\quad}$



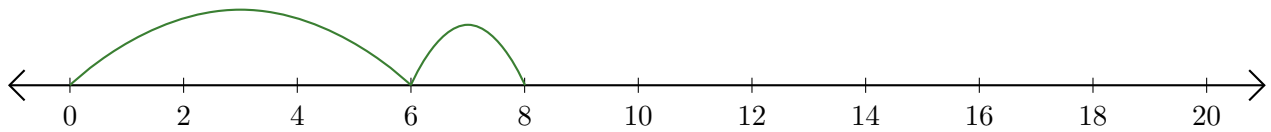
Adding on Number Lines (H) Answers

Use the number lines to calculate each sum.

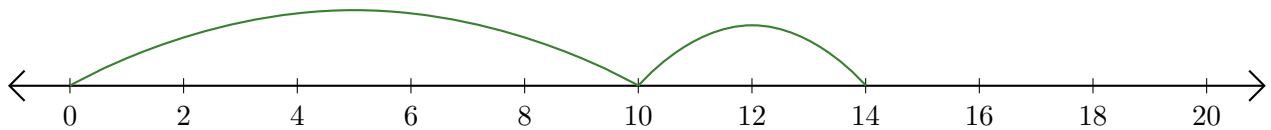
1. $16 + 2 = \underline{18}$



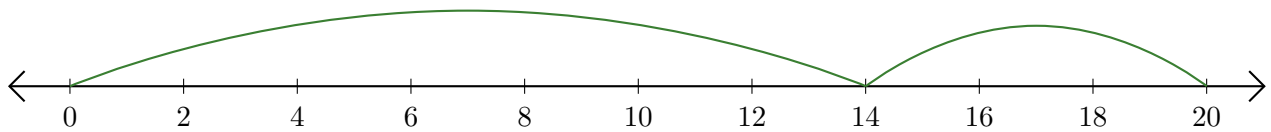
2. $6 + 2 = \underline{8}$



3. $10 + 4 = \underline{14}$



4. $14 + 6 = \underline{20}$



5. $2 + 4 = \underline{6}$

