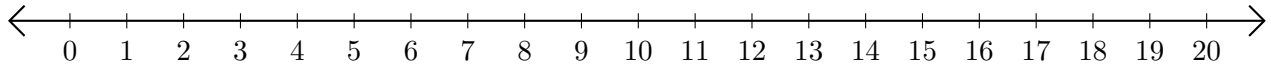


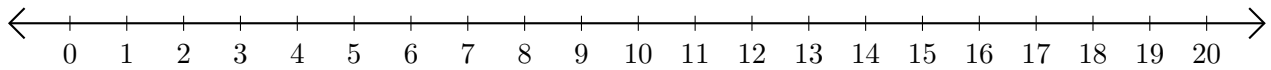
# Adding on Number Lines (A)

Use the number lines to calculate each sum.

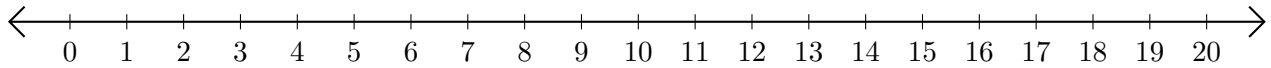
1.  $19 + 1 = \underline{\quad}$



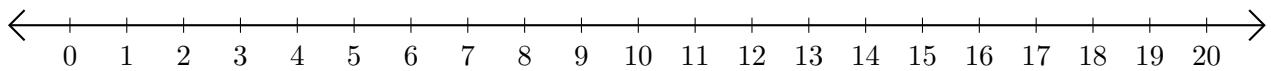
2.  $16 + 4 = \underline{\quad}$



3.  $6 + 11 = \underline{\quad}$



4.  $5 + 9 = \underline{\quad}$



5.  $7 + 6 = \underline{\quad}$

