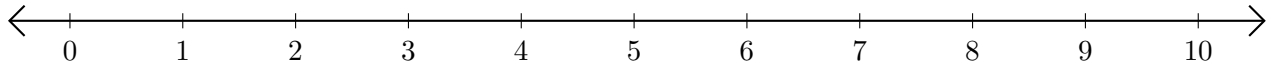


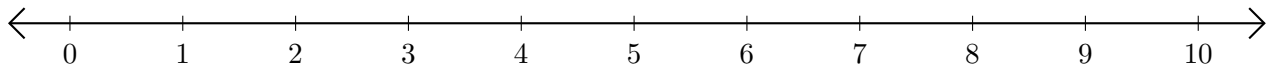
# Adding on Number Lines (H)

Use the number lines to calculate each sum.

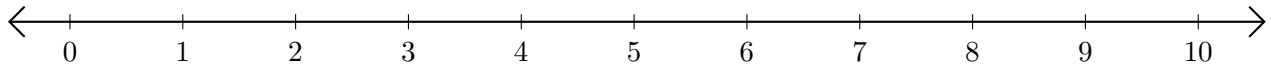
1.  $9 + 1 = \underline{\quad}$



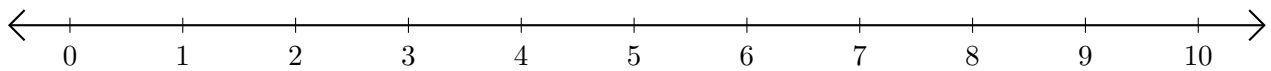
2.  $6 + 2 = \underline{\quad}$



3.  $2 + 6 = \underline{\quad}$



4.  $3 + 4 = \underline{\quad}$



5.  $8 + 1 = \underline{\quad}$

