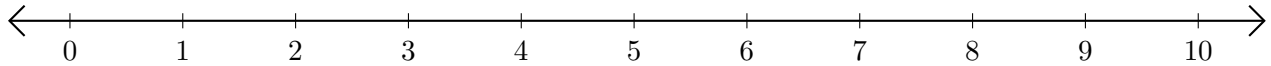


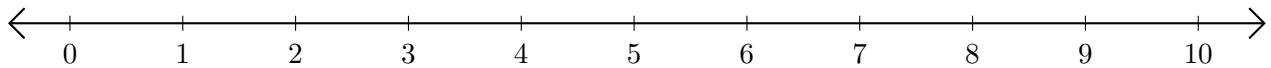
Adding on Number Lines (E)

Use the number lines to calculate each sum.

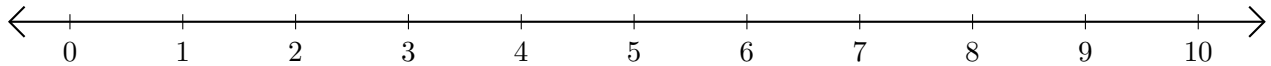
1. $5 + 3 = \underline{\quad}$



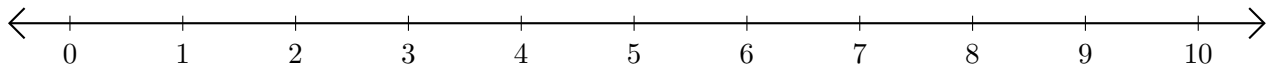
2. $4 + 6 = \underline{\quad}$



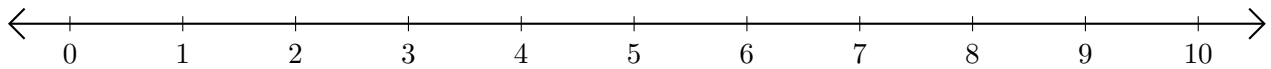
3. $6 + 3 = \underline{\quad}$



4. $7 + 1 = \underline{\quad}$



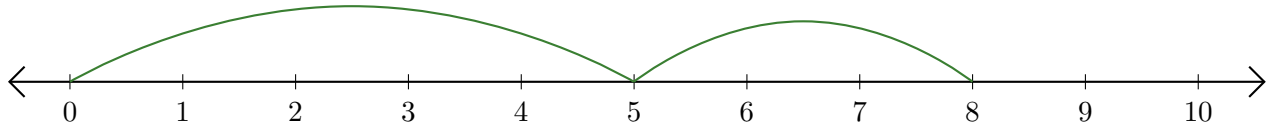
5. $9 + 1 = \underline{\quad}$



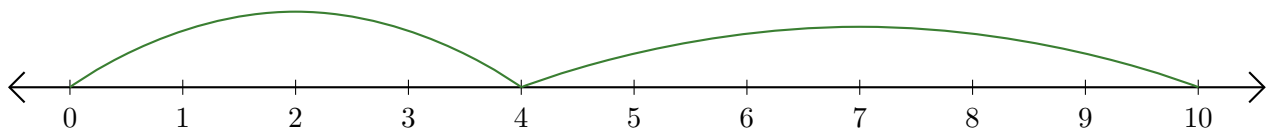
Adding on Number Lines (E) Answers

Use the number lines to calculate each sum.

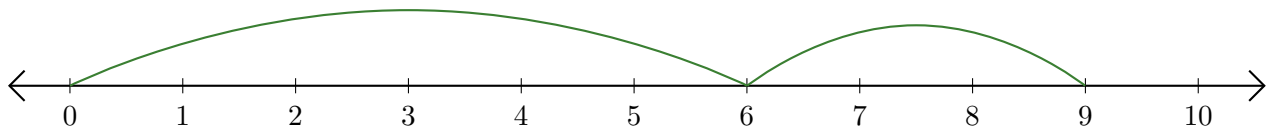
1. $5 + 3 = \underline{8}$



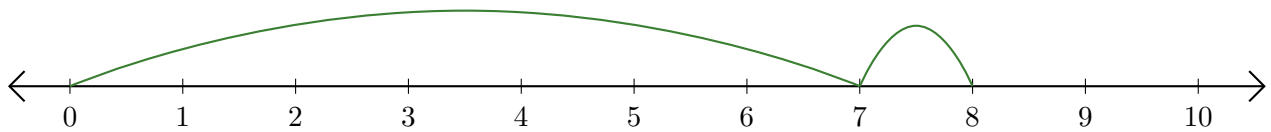
2. $4 + 6 = \underline{10}$



3. $6 + 3 = \underline{9}$



4. $7 + 1 = \underline{8}$



5. $9 + 1 = \underline{10}$

