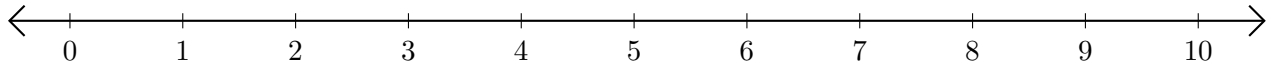


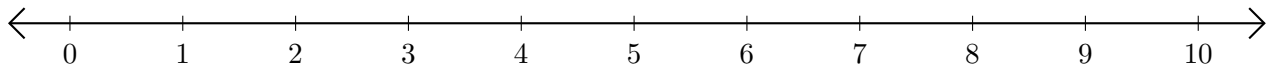
Adding on Number Lines (D)

Use the number lines to calculate each sum.

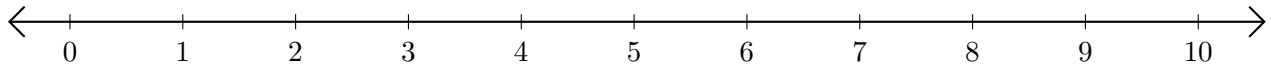
1. $4 + 1 = \underline{\quad}$



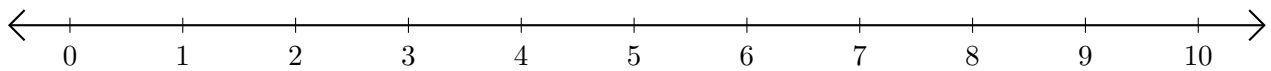
2. $8 + 2 = \underline{\quad}$



3. $9 + 1 = \underline{\quad}$



4. $5 + 3 = \underline{\quad}$



5. $7 + 3 = \underline{\quad}$

