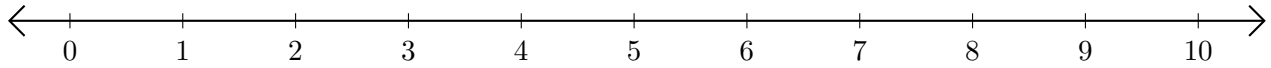


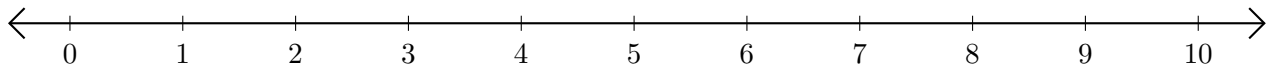
# Adding on Number Lines (A)

Use the number lines to calculate each sum.

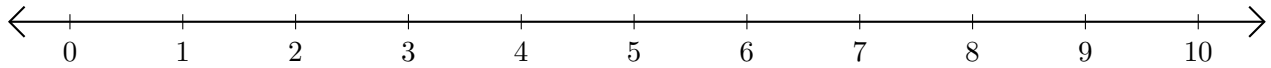
1.  $6 + 1 = \underline{\quad}$



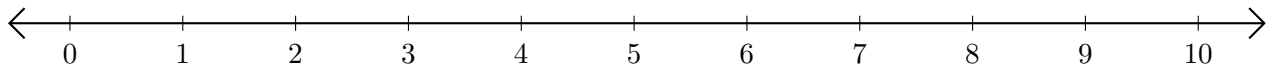
2.  $5 + 2 = \underline{\quad}$



3.  $8 + 2 = \underline{\quad}$



4.  $9 + 1 = \underline{\quad}$



5.  $7 + 3 = \underline{\quad}$

