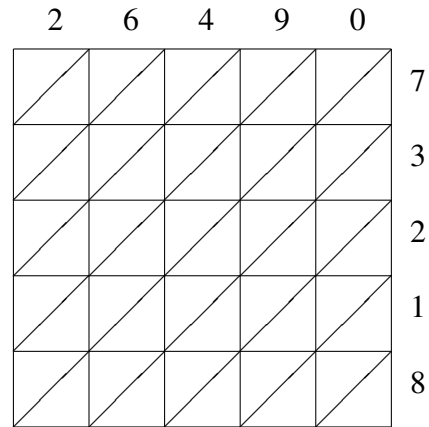
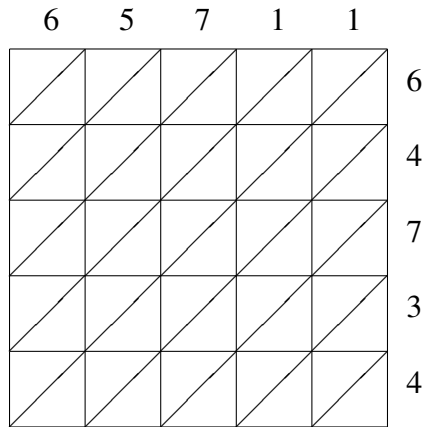


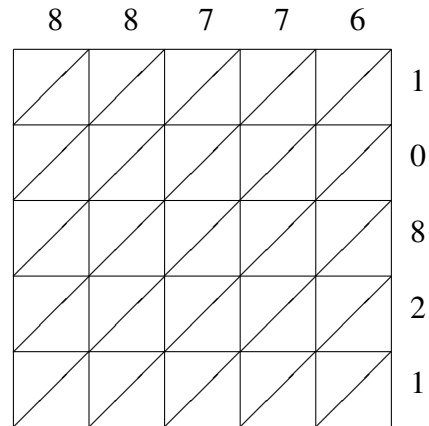
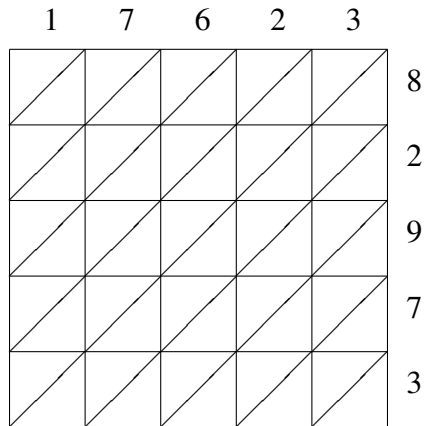
# Lattice Multiplication (I)

Use lattice multiplication to find each product.



$65711 \times 64734 = \underline{\hspace{10em}}$

$26490 \times 73218 = \underline{\hspace{10em}}$

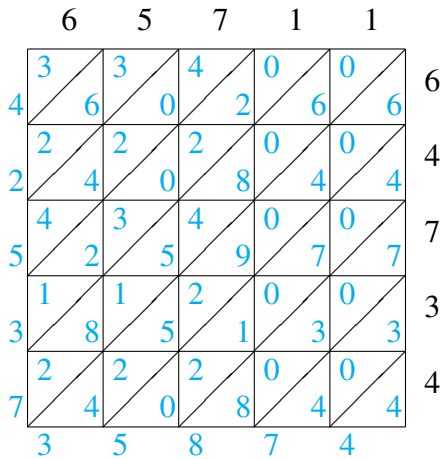


$17623 \times 82973 = \underline{\hspace{10em}}$

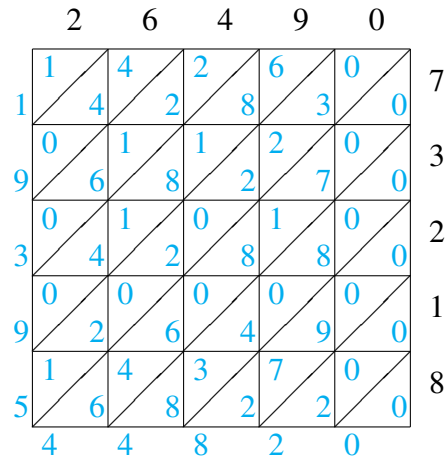
$88776 \times 10821 = \underline{\hspace{10em}}$

# Lattice Multiplication (I) Answers

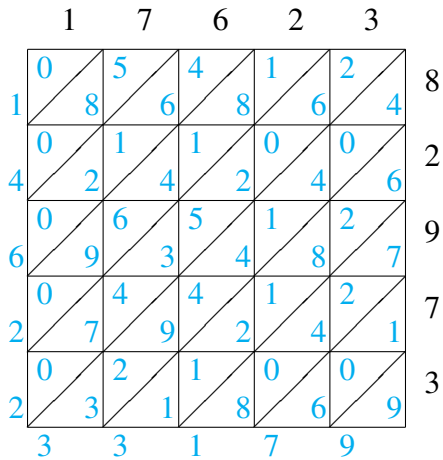
Use lattice multiplication to find each product.



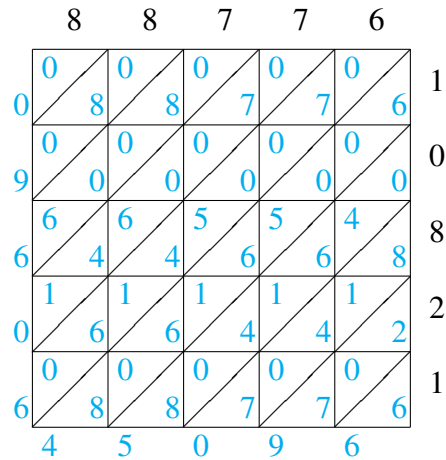
$$65711 \times 64734 = 4,253,735,874$$



$$26490 \times 73218 = 1,939,544,820$$



$$17623 \times 82973 = 1,462,233,179$$



$$88776 \times 10821 = 960,645,096$$